

It's Summer!

Dear Rising Fourth Graders,

I know that you are so excited that it is summer. I am too! It is so great to have some free time to spend doing activities of your choice.

You have spent the last few months working very hard on your reading and math skills. If you do not practice over the summer, many of the things you learned will disappear.

In this packet, you will find some ways to help your mind stay full of the things you have learned this year. This will help you be ready to go in the fall. Keep track of the books you read and bring the list back to school in August. You are required to write a one paragraph summary for one chapter book that you read over the summer. You should submit your writing in paragraph form on a lined sheet of paper. You may handwrite the paragraph or type it and print it if you prefer.

The reading bingo board is an optional way to track your reading. The math pages are **HIGHLY** recommended, but not required.

Please bring all of your items to school with you in August.

I can't wait to hear about all of your adventures! Happy Reading and Math Practicing!

Love,

Mrs. Scharlach



School Supply List Grade 4

- two 3-ring binders with 1 *inch* spines, any color (one will stay at school)
- one pack of 5 Plastic Dividers *WITH POCKETS* for 3-ring binder
- two dozen #2 pencils (Ticonderoga brand preferred)
- 24 count set of colored pencils (We will use these daily!)
- scissors
- hand-held pencil sharpener
- pencil case or cases that hold **all** your art and writing supplies AND fits in your desk
- pencil top or hand-held erasers
- six** composition notebooks with at least 100 pages each (**not** spiral)
- one large **white** Elmer's school glue (We will use this up! Maybe stash a second one away for after Christmas.)
- 2 boxes of tissues to be donated to the classroom supply
- Expo Dry Erase markers- any size or color (for YOU!)
- regular markers, one package of thick and one package of thin (or Crayola Super Tips which can do both)
- old shirt for messy art projects
- one clipboard
- one pair of headphones or earbuds to stay at school (please label with name)


You may bring your supplies to Open House in August

You may email me with any questions!

jenneth.scharlach@bradfordchristianacademy.org



SUMMER READING BINGO


































A book that has won an award	A book about someone who is different from me	A book that made me laugh	A book that teaches me about an event in history	A book about a real person
A book that can't be real	A book that I can read to someone younger	A book with a talking animal	A book that has won an award	A book of poems
A book with a talking animal	A book that teaches me about a place	Your choice!	A book that makes me think	A book that made me laugh
A book about a real person	A book about summer	A book that has won an award	A book about friendship	A book that is about a movie
A book that teaches me about an animal	A book that made me laugh	A book of poems	A book about winter	A book about an event in history



SUMMER READING LOG



Date	Title	Author	Rating
			  
			  
			  
			  
			  
			  
			  
			  
			  
			  




Summer Math

Name _____

You're on your way to Fourth Grade.



Color one step along the path for each day that you complete.



START



1

2

3

4

5

6

7

8

9

11

12

13

14

15

16

17

18

19

20

21

22

23

24

25

26

27

28

29

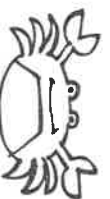
30



You have a good start!



Halfway there!

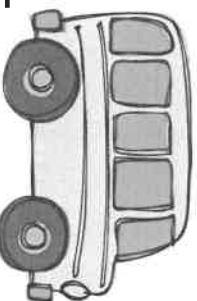


Wow - almost done!



Keep up the good work!

We can't wait to see you in Fourth Grade!



We Scream for Ice Cream

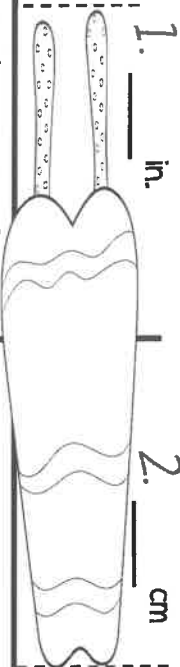
Day

1

Measure the popsicle to the nearest $\frac{1}{2}$ inch and centimeter.

1. _____ in.

2. _____ cm



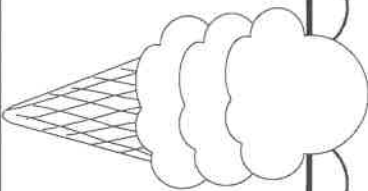
3.

Jessi ordered 3 scoops. Each scoop is the same size.

→ Color $\frac{1}{3}$ chocolate.

→ Color $\frac{1}{3}$ strawberry.

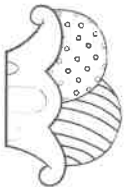
→ Color $\frac{1}{3}$ vanilla.




Score

5

4. Mandy put 2 big spoons of sprinkles on her ice cream. If each spoon holds 175 sprinkles, how many sprinkles did Mandy use in all?



5. Mr. Pete ordered 120 Klondike® bars for his ice cream truck. He sold 42 of the bars last week. How many bars does he have left?



Score

5

Beach Time

Day

2

1. Use $<$, $>$, or $=$.

423 shells 432 shells



2. Write the

← greater number using words.

_____ shells

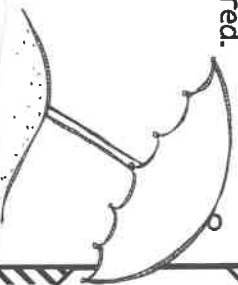
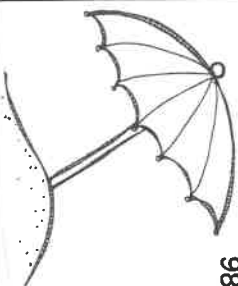
3. ← Draw this number using buckets, shovels, and shells. Follow the key.

KEY: = 100

= 10

= 1

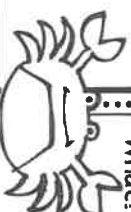
5. There are 224 umbrellas on the beach. 76 are striped, 98 are blue, and the rest are red. How many are red?



Score

5

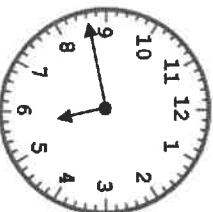
Work and doodle space



What?! That's crazy!!!

4. It's time to leave the beach. What time is it?

_____ : _____



Day

3

Side 2

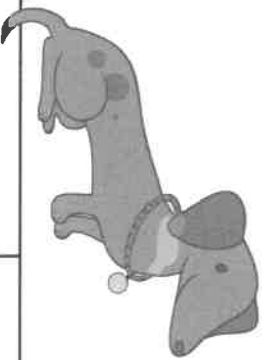
Fast Facts

Set a timer for one minute. How many facts can you answer correctly in one minute? Write your score here. →→

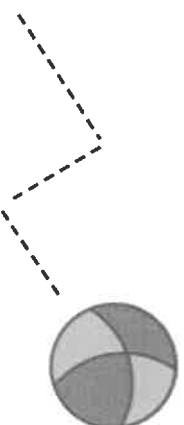
Score

20

Help Taco find his ball. Color all the squares with an even product.



4×8	1×7	1×3	7×3	7×7	5×5
6×6	5×7	9×9	5×4	8×2	2×6
2×5	8×6	8×8	9×7	3×3	2×4



Road Trip

Day

4

1. How many states have you visited?



2. If the car stops at Point A, how many miles is that?



3. Carla saw a license plate with 4 numbers. Use the clues to write the numbers.

A	B	C	D
---	---	---	---

Clues
 $A = 32 \div 8$ $B = A + A$
 $C = B + 1$ $D = C \div 3$

5. Road signs! Name the shape of each. Use the word box.



Score

5

work and doodle space

Shapes Word Box

- Square
- Rectangle
- Triangle
- Rhombus
- Pentagon
- Circle
- Octagon

Play Ball!

Day

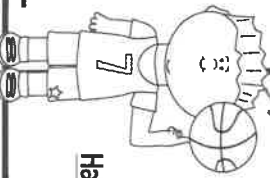
5

1. Use $<$, $>$, or $=$.

742 soccer balls 724 soccer balls



2. How many sports can you think of that use a ball? List them and count them.



3. Jason kept track of how many baskets he made from different spots on the basketball court. How many total points did he score from the 3-point line? _____

Half Court Foul Line 3-Point Line

|| |||| ||||

5. Draw a bar graph using this data. ↑ Use a scale of 2.

Title:

Score

5

4. Some dads and kids played baseball on Father's Day. The dads' score was 5. The kids' score was _____.

Happy Father's Day 3 times that number.



Happy Father's Day What was the kids' final score? _____



Day

6

Side 2

Fast Facts

Set a timer for one minute.
How many facts can you answer correctly
in one minute? Write your score here. →→

Score

20

candy colors:

products less than 50: yellow

products greater than 50: green

 $3 \times 5 =$

 $4 \times 7 =$

 $7 \times 8 =$

 $5 \times 1 =$

 $7 \times 9 =$

 $9 \times 3 =$

 $6 \times 9 =$

 $8 \times 5 =$

 $0 \times 8 =$

 $7 \times 6 =$

 $2 \times 3 =$


 $6 \times 8 =$


 $7 \times 1 =$

 $9 \times 4 =$

 $6 \times 3 =$

 $6 \times 10 =$

 $3 \times 4 =$

 $5 \times 9 =$

 $8 \times 3 =$

 $9 \times 8 =$

Water Fun

Day

7

1. Use $<$, $>$, or $=$.

$\frac{1}{2}$ bucket of water $\frac{1}{3}$ bucket of water

2. Draw a picture to show

\leftarrow this answer is correct.

3. One pack of balloons sells for 59¢. Peter and his friends want to buy 3 packs so they can have a water balloon fight. How much money will they need to buy the 3 packs?

\$ _____

4. Tina played in the sprinkler for 1 hour. She stopped playing at 4:20.

What time did she start playing?

6

5. Maya skips rope through the sprinkler while counting by 6s. Help her count

Score

5

Goin' Camping

Day

8

1. Animals at the Campground

Squirrels 6 Deer 3
Raccoons 2 Birds 19

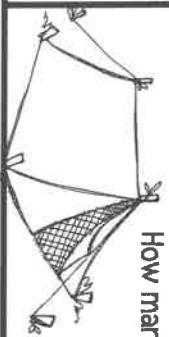
How many in all? _____



3. Miguel's Boy Scout troop is going camping. There are 16 boys and 4 tents. They want an equal number of boys in each tent.

How many boys in each tent?

_____ boys



5. Miguel rolled up his sleeping bag and tied it with string. Estimate about how much string he used.

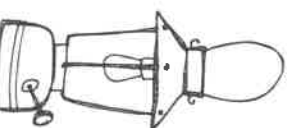
about _____ inches

OR about _____ feet

Score

5

work and doodle space



4. Jenna is making smores. She uses 2 graham crackers, 4 small pieces of chocolate, and 1 marshmallow for each smore. How many graham crackers and pieces of chocolate will she need for 8 smores?

crackers: _____ chocolate: _____



Day

9

Side 2

Fast Facts

Set a timer for one minute.
How many facts can you answer correctly
in one minute? Write your score here. →→

Score

20

Scoops! Color the scoops your favorite ice cream flavors.

$$\begin{array}{r} 2 \\ \times 2 \\ \hline \end{array}$$

$$\begin{array}{r} 2 \\ \times 9 \\ \hline \end{array}$$

$$\begin{array}{r} 6 \\ \times 7 \\ \hline \end{array}$$

$$\begin{array}{r} 6 \\ \times 3 \\ \hline \end{array}$$

$$\begin{array}{r} 8 \\ \times 9 \\ \hline \end{array}$$

$$\begin{array}{r} 3 \\ \times 7 \\ \hline \end{array}$$

$$\begin{array}{r} 5 \\ \times 8 \\ \hline \end{array}$$

$$\begin{array}{r} 0 \\ \times 6 \\ \hline \end{array}$$

$$\begin{array}{r} 3 \\ \times 8 \\ \hline \end{array}$$

$$\begin{array}{r} 2 \\ \times 7 \\ \hline \end{array}$$

$$\begin{array}{r} 1 \\ \times 9 \\ \hline \end{array}$$

$$\begin{array}{r} 3 \\ \times 2 \\ \hline \end{array}$$

$$\begin{array}{r} 6 \\ \times 5 \\ \hline \end{array}$$

$$\begin{array}{r} 9 \\ \times 6 \\ \hline \end{array}$$

$$\begin{array}{r} 8 \\ \times 7 \\ \hline \end{array}$$

$$\begin{array}{r} 4 \\ \times 9 \\ \hline \end{array}$$

$$\begin{array}{r} 6 \\ \times 4 \\ \hline \end{array}$$

$$\begin{array}{r} 6 \\ \times 2 \\ \hline \end{array}$$

$$\begin{array}{r} 9 \\ \times 5 \\ \hline \end{array}$$

$$\begin{array}{r} 8 \\ \times 4 \\ \hline \end{array}$$

Sand Castles

Day

10

1. Jo built 24 towers. A wave swept $\frac{1}{2}$ of them away. How many are left? _____



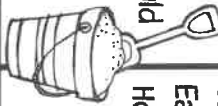
How many are left? _____

4. There are 30 towers in this pattern.

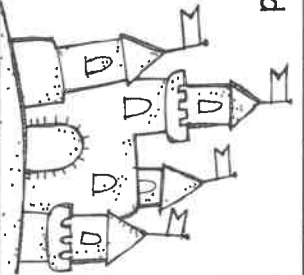


How many are there? _____

2. When a bucket is full of sand, it weighs 750 grams. How much would 2 buckets of sand weigh? _____ grams



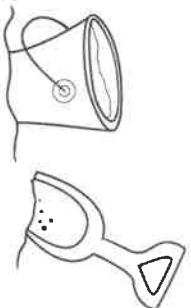
3. Olivia and friends made 6 sand castles that looked like this one. Each castle has four flags. How many flags in all? Write the equation.



5. Rashad built a huge sand castle. It has 4 big towers. Towers 1 and 2 each took 45 minutes to build. Tower 3 took 55 minutes. Tower 4 took 1 hour and 10 minutes. How long did Rashad work on his sand castle? _____ hours _____ minutes

_____ hours _____ minutes

work and doodle space:



Riding Bikes

Day

11

1. How much for one bike helmet and two tires? \$ _____

Atlas Bike Shop	
Helmet	\$ 24
Tire	\$ 15
Bell	\$ 10
Chain	\$ 23

2. How much for two chains, a bell, and two tires? \$ _____

\$ _____

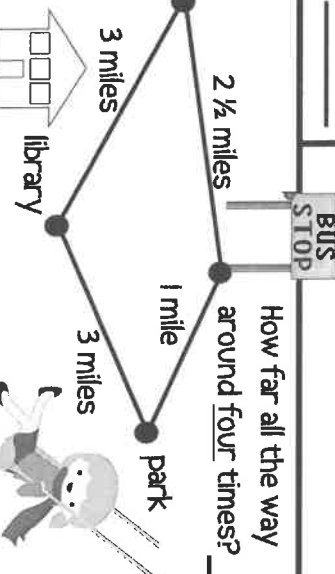
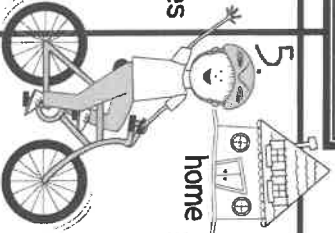
3. Fill in the measurement units that make sense in this story. Use the word box. →

Jacob is 9 _____ old.
Jacob's bike is 5 _____ long.
Jacob's bike weighs 12 _____.

Word box	
meters	years
liters	days
ounces	grams
kilograms	feet

4. Look at the map. →

Jacob rode to the library and back 6 times this summer. How many miles did he ride? Write the equation.
_____ miles



How far all the way around four times? _____ mi.

Score

5

Side 2

Day

12

Fast Facts

Set a timer for one minute.
How many facts can you answer correctly
in one minute? Write your score here. →→

Crab attack!



See if you can score 20/20!

Score

20

$1 \times 8 =$

$9 \times 2 =$

$4 \times 6 =$

$5 \times 6 =$

$4 \times 2 =$

$5 \times 8 =$

$2 \times 8 =$

$8 \times 7 =$

$3 \times 9 =$

$7 \times 4 =$

$4 \times 5 =$

$9 \times 7 =$

$8 \times 2 =$

$7 \times 5 =$

$6 \times 6 =$

$7 \times 2 =$

$3 \times 6 =$

$4 \times 4 =$

$3 \times 10 =$

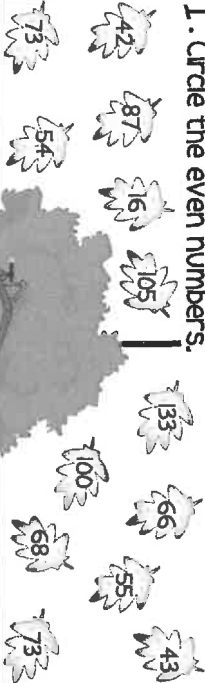
$4 \times 3 =$

In the Tree House

Day

13

1. Circle the even numbers.



2. Circle the odd numbers.

3. Choose the best estimate. Jason's tire swing hangs from a rope that is _____ long.

- > 2 feet
- > 20 feet
- > 200 feet

4. Four friends are sharing a bag of 32 candies in their tree house. How many pieces of candy will each friend get? Write the equation.

64 $\overline{)100}$ 9 4 25 36 49 16 81 49 16 16

Tree House Password


A	C	E	M	O	R	S	T	Y
2	3	4	5	6	7	8	9	10
x 2	x 3	x 4	x 5	x 6	x 7	x 8	x 9	x 10

Fill in answers ← here.

Score

5

Work and doodle space

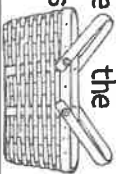


Picnic Time

Day

14

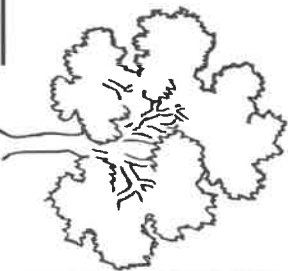
1. Jocelyn brought pizza, apples, and a watermelon on the picnic. Circle the item that is heaviest.



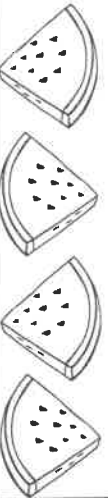
2. Jocelyn will share her food with her sister. Split each in half.



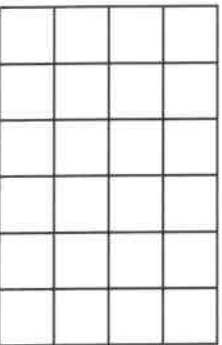
3. Mark and his family like to picnic in the park under the oak trees. Mark collected 50 acorns. He gave half of them to his brother. How many acorns does he have left?



4. Jocelyn counted 17 seeds in each of her 4 pieces of watermelon. How many seeds in all?



5. Lisa spread this tablecloth on the ground.



What is the total area of the green and yellow parts?

- Color $\frac{1}{4}$ red.
- Color $\frac{1}{4}$ blue.
- Color $\frac{1}{4}$ green.
- Color $\frac{1}{4}$ yellow.

_____ sq. units

Score

5

Day

15

Side 2

Fast Facts

Set a timer for one minute.
How many facts can you answer correctly
in one minute? Write your score here. →→

Score

20

Sunny days! Color the sun yellow if it has a correct answer. Practice any facts you got wrong.

8
x
16

x 2
10

8
x
64

x 5
45

3
x
9

x 6
48

4
x
24

x 9
27

4
x
32

x 1
7

3
x
21

x 8
48

7
x
42

x 6
30

2
x
18

x 7
63

8
x
24


x 9
0

6
x
18

x 2
6

Pool Party


1. Sam is having his 9th birthday party at the pool. Eleven friends are coming. One friend brings 3 presents, 6 friends bring 2 presents, and the rest bring 1 present. How many presents in all? _____




2. Sam's mom is buying pizza for the party. Each pizza has 8 slices. If Sam and his 11 friends each eat 2 slices, how many pizzas should Sam's mom buy? _____ pizzas

3. Use <, >, or =.
- $\frac{2}{8}$ of a pizza $\frac{2}{4}$ of the same pizza

work and
doodle space



4. Mill Towne Pool is shaped like a rectangle. What is the pool's perimeter?



5. Bridget is joining the swim team this summer. At time trials, she swam the freestyle stroke across the pool (50 meters) in:
- 50 seconds 50 minutes 5 hours

Score _____

5

Candy Shop

1. How much for 4 bags of M&Ms? →
- | Sweet Stuff Candy Shop | |
|------------------------|-----|
| Skittles | 35¢ |
| M&Ms | 50¢ |
| Gummies | 49¢ |
| Sour Chews | 25¢ |

2. Gracie bought 4 Skittles, 6 M&Ms, 12 Gummies, and 14 Sour Chews. How many bags of candy did she buy? _____

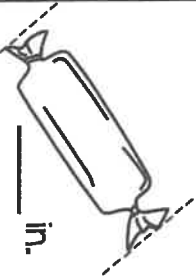
3. Draw a picture graph to show the number of candy bags Gracie bought. Use to show 2 bags.
- Title: _____

Key: _____

4. Use <, >, or =.

165 pennies 31 nickels

5. Measure the lengths of the candies to the nearest $\frac{1}{4}$ inch.



Score _____

5

I hope you are having a FUN summer !!!



Day

18

Side 2

Fast Facts


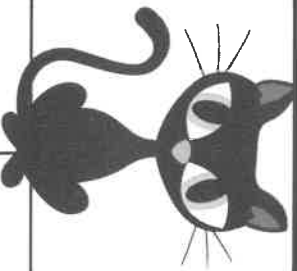
Set a timer for one minute.

How many facts can you answer correctly in one minute? Write your score here. →→

Score

20

Help Bristol find the mouse. Color all the squares with an odd quotient.



20 ÷ 4

9 ÷ 3

16 ÷ 8

5 ÷ 5

14 ÷ 2

42 ÷ 6

36 ÷ 9

18 ÷ 6

28 ÷ 7

6 ÷ 2

32 ÷ 4

56 ÷ 8

4 ÷ 1

35 ÷ 7

21 ÷ 3

49 ÷ 7

On the Farm

Day

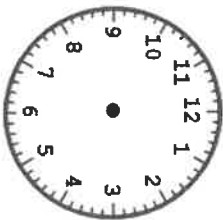
19



- Go fetch! Split Maisy's ball into quarters.



- It's 5:45 am. Time to milk the cows. Draw hands on the clock to show 5:45.



- There are 6 baby chicks. Two chicks run away. What fraction of the chicks is left?



6 baby chicks. Two chicks run away. What fraction of the chicks is left?

- Goats Lucy and Leo were born this year on April 2. Look at a calendar. How old are they today? (In days)



_____ days



Score

5

work and doodle space

Don't forget me...I'm an animal, too!



Camden Park Zoo

Day

20

- Use $<$, $>$, or $=$.

126 reptiles



162 reptiles

- Make an estimate.

A giraffe's neck is about _____ long.



6 feet 60 yards

- What is 70 less than the greater number?

← _____

- The seal show starts in three-quarters of an hour. How many minutes until the show starts?

_____ minutes

- Over at the Reptile House, the alligator is fed 4 pounds of chicken and twice that amount of fish. He eats 7 pounds of the food. How much food does he have left to eat?



_____ pounds

Score


5



Day

21

Side 2



Set a timer for one minute.
 How many facts can you answer correctly
 in one minute? Write your score here. →→

Score

20

Candy Colors:

3 or Less: Red

4 – 6: Yellow

7 – 10: Green

$4 \div 2 =$

$12 \div 3 =$

$48 \div 8 =$

$72 \div 8 =$

$12 \div 4 =$

$9 \div 1 =$

$16 \div 4 =$

$18 \div 2 =$

$54 \div 6 =$

$40 \div 5 =$

$18 \div 9 =$

$25 \div 5 =$

$56 \div 7 =$

$8 \div 8 =$

$3 \div 1 =$

$12 \div 2 =$

$16 \div 2 =$

$40 \div 4 =$

$36 \div 4 =$

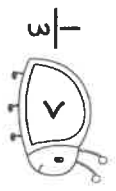
$24 \div 6 =$

Busy Bugs

Day

22


1. Make this true.



2. Name two more fractions that are less than $\frac{1}{3}$.



3. Measure the grasshopper to the nearest $\frac{1}{4}$ inch.




_____ in.

Score

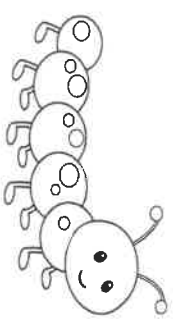
5

4. Show 18 in 3 more ways.



3 x 6

5. This caterpillar has 8 spots on his body. If 4 more caterpillars have the same number of spots, how many spots on all 5 caterpillars? Write the equation.



_____ spots

Score

5

Summer Birthday!

Day

23

1. Jake's party is starting. What time is it?



_____ : _____

2. Jake's party will end in $2\frac{1}{2}$ hours. What time will the party end?

_____ : _____

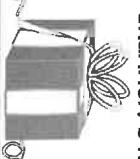
3. Eva is making a bead necklace for Sophie. Use the table → to find out how much each letter bead costs.

S
O
P
H
I
E

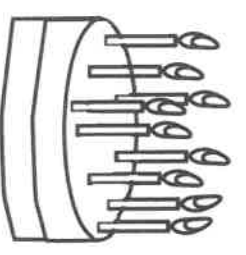
How much does the necklace cost in all?

¢

4. Shannon's grandmother just turned 74 years old. Shannon's mom is 39 years younger. How old is Shannon's mom?



5. Today is Kenneth's 9th birthday. His dad gave him 9 dollars, 9 dimes, 9 nickels, and 9 pennies! How much money is that?



\$ _____

Score

5

Work and doodle space

A	2
B	3
C	2
D	3
E	4
F	2
G	3
H	3
I	5
J	3
K	2
L	3
M	6
N	3
O	4
P	6
Q	3
R	2
S	3
T	4
U	2
V	2
W	3
X	2
Y	3
Z	1

Day

24

Side 2

Fast Facts

Set a timer for one minute.
How many facts can you answer correctly
in one minute? Write your score here. →→

Score

20

Scoops! Color the scoops your favorite ice cream flavors.

$$\begin{array}{r} 8 \\ \div 2 \\ \hline \end{array}$$

$$\begin{array}{r} 42 \\ \div 7 \\ \hline \end{array}$$

$$\begin{array}{r} 18 \\ \div 3 \\ \hline \end{array}$$

$$\begin{array}{r} 7 \\ \div 1 \\ \hline \end{array}$$

$$\begin{array}{r} 8 \\ \div 4 \\ \hline \end{array}$$

$$\begin{array}{r} 54 \\ \div 9 \\ \hline \end{array}$$

$$\begin{array}{r} 30 \\ \div 10 \\ \hline \end{array}$$

$$\begin{array}{r} 72 \\ \div 9 \\ \hline \end{array}$$

$$\begin{array}{r} 63 \\ \div 7 \\ \hline \end{array}$$

$$\begin{array}{r} 28 \\ \div 4 \\ \hline \end{array}$$

$$\begin{array}{r} 27 \\ \div 9 \\ \hline \end{array}$$

$$\begin{array}{r} 30 \\ \div 6 \\ \hline \end{array}$$

$$\begin{array}{r} 64 \\ \div 8 \\ \hline \end{array}$$

$$\begin{array}{r} 45 \\ \div 5 \\ \hline \end{array}$$

$$\begin{array}{r} 21 \\ \div 7 \\ \hline \end{array}$$

$$\begin{array}{r} 24 \\ \div 8 \\ \hline \end{array}$$

$$\begin{array}{r} 15 \\ \div 5 \\ \hline \end{array}$$

$$\begin{array}{r} 6 \\ \div 6 \\ \hline \end{array}$$

$$\begin{array}{r} 14 \\ \div 7 \\ \hline \end{array}$$

$$\begin{array}{r} 81 \\ \div 9 \\ \hline \end{array}$$

Bookworm

Day

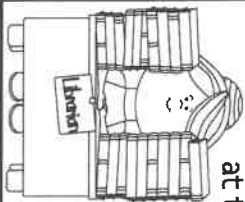
25

1. Use $<$, $>$, or $=$.
 $\frac{1}{8}$ of a book \bigcirc $\frac{1}{4}$ of the same book

4. What is the title of your most favorite book?



2. Julia read 298 pages. Mia read 352 pages. About how many more pages did Mia read than Julia? (Round to nearest 10, then subtract.) _____




3. There are 6 people waiting to check out books at the library. Three people have 6 books each. Two people have 4 books each, and one person has 5 books. How many books in all? _____ books

5. Cody is reading 3 books this summer.

Book 1 has 280 pages.
 Book 2 has 124 pages.
 Book 3 has 378 pages.

How many pages will Cody read this summer?
 _____ pages




Score

5

We Love Monkeyshines!

Day

26



1. How old is Monkeyshine? Clues:
 > He's older than a 3rd grader.
 > He's younger than $4 \times 3 =$ _____ nickels. How old is he? _____

4. Leonard measured Monkeyshine's tail. How long is the tail? _____ inches (using this ruler)



2.

3.

Make a necklace for Monkeyshines. Use the same table from Day 23. Wow, he has a long name!

M O N K E Y S H I N E S

How much will the necklace cost? _____ \$

5. Brianna wants to tie a red ribbon around Monkeyshines. The blue ribbon is $\frac{3}{4}$ inch longer than the red ribbon. The yellow ribbon is 4 inches longer than the blue ribbon. Color the ribbons.

_____ 22 $\frac{1}{2}$ inches long
 _____ 18 $\frac{1}{2}$ inches long
 _____ 17 $\frac{3}{4}$ inches long

Score

5

work and
 doodle space



How many books will you read this summer?

Day

27

Side 2

Fast Facts

Set a timer for one minute.
How many facts can you answer correctly
in one minute? Write your score here. →→

Crab attack!



See if you can score 20/20!

Score

20

$48 \div 8 =$

$63 \div 9 =$

$24 \div 3 =$

$27 \div 3 =$

$7 \div 7 =$

$24 \div 4 =$

$50 \div 5 =$

$35 \div 5 =$

$20 \div 5 =$

$42 \div 6 =$

$30 \div 5 =$

$6 \div 3 =$

$70 \div 10 =$

$15 \div 3 =$

$9 \div 3 =$

$32 \div 8 =$

$10 \div 2 =$

$40 \div 8 =$

$8 \div 4 =$

$28 \div 7 =$

At the Playground

Day

28

1. Name one thing at the playground that is shorter than a meter.

2. Name one thing at the playground that is longer than a meter.

3. Nine boys on skateboards. Each skateboard has 4 wheels. How many wheels in all? Write the equation.




_____ wheels

4. Aubrey uses sidewalk chalk to make a design. If the square shows halves, color it orange. If fourths, color purple. If thirds, color blue.



5. Maya is skipping rope while counting by 6s! Help her count.



6 12

Score

5

work and
doodle space

Under the Sea

Day

29

865 fish



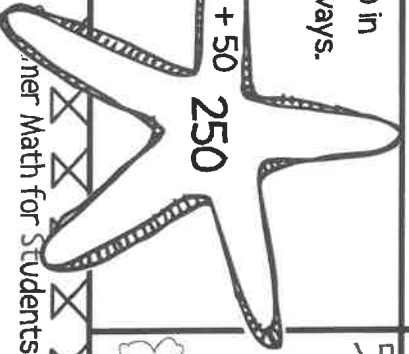
856 fish

1. Use $<$, $>$, or $=$.

4. Show 250 in 4 more ways.

$200 + 50$

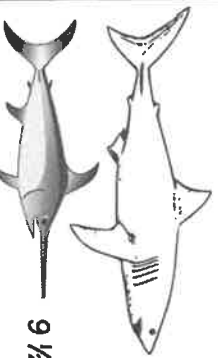
250



2. Start with the lesser \leftarrow number. Add 125, then subtract 699. What number?



3. How much longer is the shark than the swordfish?



9 $\frac{1}{2}$ feet

16 $\frac{1}{2}$ feet

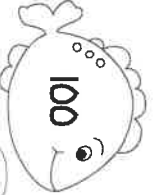
_____ feet

5.

10



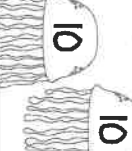
100



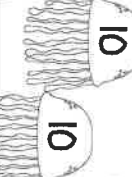
100



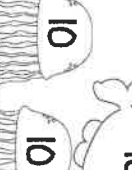
10



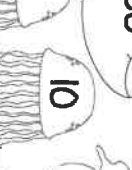
10



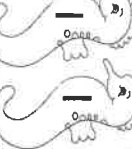
10



10



10



1



1

100

Color 352.

Score

5



Day

30

Side 2

Fast Facts

Set a timer for one minute.
How many facts can you answer correctly
in one minute? Write your score here. →→

Score

20

Sunny days! Color the sun yellow if it has a correct answer. Practice any facts you got wrong.

40

$$\frac{\square}{4} \div \square$$

4

25

$$\frac{\square}{5} \div \square$$

5

27

$$\frac{\square}{9} \div \square$$

9

16

$$\frac{\square}{8} \div \square$$

8

12

$$\frac{\square}{4} \div \square$$

4

$$\frac{\square}{6} \div 3$$

$$\frac{\square}{7} \div 5$$

$$\frac{\square}{9} \div 6$$

$$\frac{\square}{9} \div 4$$

$$\frac{\square}{6} \div 4$$

32

$$\frac{32}{\square} \div \square$$

4

10

$$\frac{10}{\square} \div \square$$

2

63

$$\frac{63}{\square} \div \square$$

9

49

$$\frac{49}{\square} \div \square$$

7

30

$$\frac{30}{\square} \div \square$$

10

$$\frac{\square}{6} \div 6$$

$$\frac{\square}{4} \div 4$$

$$\frac{\square}{2} \div 6$$

$$\frac{\square}{9} \div 5$$

$$\frac{\square}{9} \div 8$$