

Hello Future Third Graders!

I am so excited to welcome you to my class. Summer is an exciting time. I am looking forward to beaches, camping, and being with my family.

Have you ever heard of the summer slide? Sounds fun, but it means that after all your hard work, you can forget important things you learned in second grade. The good news is you can beat the summer slide!

I have given you a packet to help you review skills you have learned. This means you can start third grade strong! Plan a schedule to work on this packet over the summer and complete the reading bingo. Read, read, read. Make a list of books you might enjoy and set a goal to read them all.

Bring your learning packet and bingo card to school with you in August for a special prize! I have also included a supply list for the fall, look out for those back-to-school sales!

If you have any questions, have an adult e-mail me at:

brenda.burns@bradfordchristianacademy.org

Have an amazing summer, I look forward to being your teacher. I'll be praying for you.

Love,
Mrs. Burns

Summer Reading Bingo



<p>Read out loud to an adult</p>	<p>Read in a comfy spot</p> 	<p>Read a play out loud with a group of friends</p>	<p>Read a book that a friend recommends</p>	<p>Reread a favorite book</p> 
 <p>Read a biography</p>	<p>Read a story you wrote yourself</p>	<p>Tell a joke you read in a book</p> 	<p>Read in a pillow fort</p>	<p>Read a magazine article</p>
<p>Read a book by your favorite author</p>	<p>Read to a stuffed animal (or a real one!)</p> 	<p>FREE SPACE</p>	<p>Read the directions for a game</p>	 <p>Read outside</p>
<p>Try a book you think you won't like (you don't have to finish it!)</p>	<p>Tell an adult three facts you read in a book</p>	<p>Write a review of a book you've read</p>	<p>Read with a flashlight</p> 	<p>Read a book you got at the library</p>
 <p>Read one book in a series</p>	<p>Read out loud to a little kid</p>	<p>Read a short story</p> 	<p>Retell a story you read in your own words</p>	<p>Read in bed</p>

Name: _____

Have an adult sign each box you complete over the summer.

Blackout Board: _____
One Line Complete: _____

Week 1: Day 1



Syllables

Put the 6 words in the correct box.

backpack family castle
surfer elephant ladybug

2 syllables

3 syllables

ABC Order

Put the 10 words in ABC Order.

bag	rat
cat	lag
bit	tug
mop	top
fat	pig

1. _____
2. _____
3. _____
4. _____
5. _____
6. _____
7. _____
8. _____
9. _____
10. _____

Adverbs

Circle the adverb in each of the sentences.

The girl runs quickly.

My dog barks loudly.

My friend whispers softly.

Nouns

Circle the people, places, & things.

house zoo

an him

boy who

box shovel

vest the

Prefixes

Circle the prefix in each word.

misstep

recall

unhappy

retell

preview

Sentence Construction

Correct the sentences below. Rewrite them correctly.



1. jacks hat wuz blue and green

1. _____

2. he haz a bucket

2. _____

Week 1: Day 1



Addition

Find the sums for each problem below.

34	63	85
$+24$	$+24$	$+48$
_____	_____	_____

Subtraction

Find the difference for each problem below.

51	79	66
-23	-48	-35
_____	_____	_____

Time

Write the times shown on the clocks.



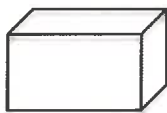
:

:

Shapes

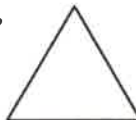
Answer the questions about the shapes below.

1.



_____ vertices
 _____ faces
 _____ edges

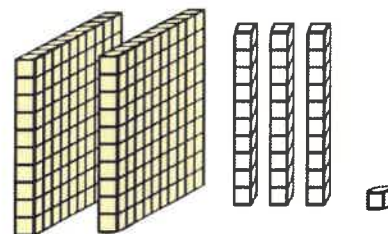
2.



_____ sides
 _____ vertices

Place Value

Write the answer in expanded form.



_____ + _____ + _____ = _____

Word Problem

Answer the problem below. Show your work.

The girl had 12 apples, 6 oranges, and 8 bananas. How much fruit did she have in all?

add

subtract

_____ □ _____ □ = _____

Fact Families


Using the numbers below, create a fact family.

10

15

25

_____ + _____ = _____
 _____ + _____ = _____
 _____ - _____ = _____
 _____ - _____ = _____



Reading Comprehension

Zack and Max went to the beach with their parents. When they got there Zack wanted to play in the sand. Max wanted to go in the water. They decided to flip a coin. Zack called heads and Max called tails. The coin landed on heads so the boys built a sand castle first. After they finished building the sand castle, the boys ran into the water. They saw lots of little fish. When they got out of the water, they picked up shells. Zack and Max had a great day at the beach!



Read the story above. Use the story to answer the questions.

1. Where are Zack and Max?

2. What was the problem?

3. How did the boys solve their problem?

4. How would you solve the problem?

Sentence Construction

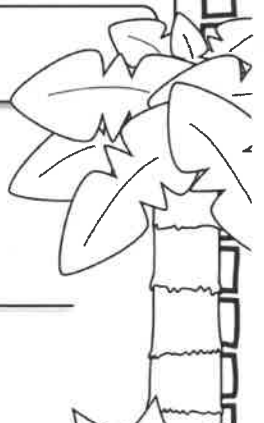
Correct the sentences below. Rewrite them correctly.

1. pam and sam fund shels



1. _____

2. did she wear the saras hat

2. _____



Week 1: Day 2



Addition

Find the sums for each problem below.

43	84	30
$+55$	$+19$	$+36$
□	□	□

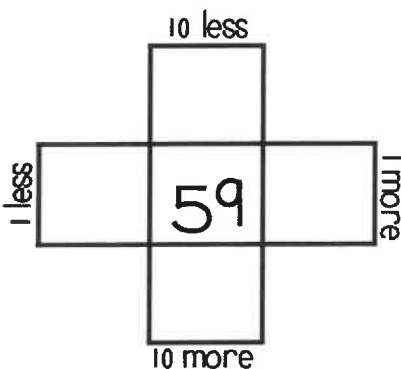
Subtraction

Find the difference for each problem below.

73	95	38
-37	-53	-18
□	□	□

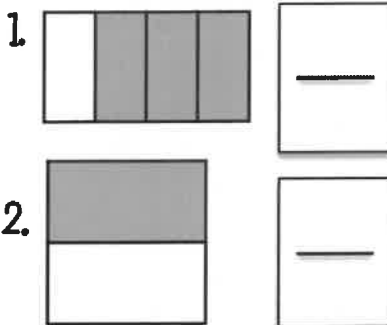
Multiples of 10

Write in the missing numbers.



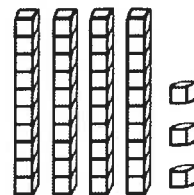
Fractions

Answer the questions about the fractions below.



Place Value

Write how many tens and ones you have for each problem and write the problem in expanded form.



___ tens ___ ones =
 ___ + ___ =

Word Problem

Answer the problem below. Show your work.

Sam has 36 pencils. He gives some away. He has 20 left. How many pencils did he give away?

add
 subtract

□ □ □ = □


Fact Families

Using the numbers below, create a fact family.



$18 + \underline{\quad} = 30$
 $12 + 18 = \underline{\quad}$
 $30 - \underline{\quad} = 18$
 $\underline{\quad} - 18 = 12$

Week 1: Day 3



Dictionary Skills

Read the definitions. Decide which definition was used in the sentence.

duck

1. a bird that quacks (noun)
2. to get out of the way of something (verb)

The duck swam in the lake.

- Definition 1
- Definition 2

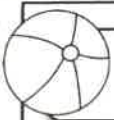


ABC Order

Put the 10 words in ABC Order.

rate	bale
tale	male
lake	fate
date	pale
file	tile

1. _____
2. _____
3. _____
4. _____
5. _____
6. _____
7. _____
8. _____
9. _____
10. _____



Adverbs

Circle the adverb in each of the sentences.

We walked home slowly.

The snow fell lightly.

Ben cut paper carefully.



Verbs

Circle the verbs (action words) below.

- | | |
|--------|--------|
| run | friend |
| walk | talked |
| and | cut |
| one | it |
| called | write |



Compound Words

Circle the compound words below.

football	following
crazy	fireworks
walked	butterfly
himself	couches
carrying	sunshine

Sentence Construction

Correct the sentences below. Rewrite them correctly.

1. did jessica may and tim go to the store



1. _____

2. my birthday wuz march 8 2013

2. _____



Week 1: Day 3



Addition

Find the sums for each problem below.

$$\begin{array}{r} 321 \\ +446 \\ \hline \end{array}$$

$$\begin{array}{r} 73 \\ +54 \\ \hline \end{array}$$

$$\begin{array}{r} 40 \\ +29 \\ \hline \end{array}$$

Subtraction

Find the difference for each problem below.

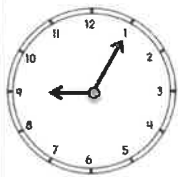
$$\begin{array}{r} 512 \\ -253 \\ \hline \end{array}$$

$$\begin{array}{r} 48 \\ -26 \\ \hline \end{array}$$

$$\begin{array}{r} 35 \\ -18 \\ \hline \end{array}$$

Time

Write the times shown on the clocks.





Counting

Fill in the missing numbers.

102, 103, ____, ____, 106

140, ____, ____, 170, ____

81, 82, 83, ____, ____, ____

____, ____, 45, 50, ____

Money

Count the coins. Write your answer in the box.





Word Problem

Answer the problem below. Show your work.

Bella caught the ball 15 times yesterday and 23 times today.
How many times did Bella catch the ball in all?

add

subtract


Graphing

Use the graph below to answer the questions.

	2	4	6	8
Cats				
Dogs				

- How many kids chose dogs? ____
- How many kids chose cats? ____
- How many kids voted in all? ____

Week 2: Day 1



Syllables

Put the 6 words in the correct box.

potato starfish basketball
hamburger Frisbee sunshine

2 syllables

3 syllables

ABC Order

Put the 10 words in ABC Order.

dog	lizard
snake	ferret
hamster	bird
rabbit	horse
turtle	cat

1. _____
2. _____
3. _____
4. _____
5. _____
6. _____
7. _____
8. _____
9. _____
10. _____

Adverbs

Circle the adverb in each of the sentences.

The child waited patiently.

The band played badly.

He ate it quickly.

Adjectives

Find the describing words.

one talk

pretty hot

barn friend

bright cup

chair blue

Suffixes

Circle the suffix in each word.

useless

durable

bigger

badly

helpless

Sentence Construction

Correct the sentences below. Rewrite them correctly.



1. the flowers werent growing

1. _____

2. april come before may

2. _____

Week 2: Day 1



Addition

Find the sums for each problem below.

$$\begin{array}{r} 563 \\ +271 \\ \hline \end{array}$$

$$\begin{array}{r} 80 \\ +69 \\ \hline \end{array}$$

$$\begin{array}{r} 31 \\ +18 \\ \hline \end{array}$$



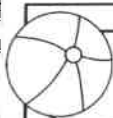
Subtraction

Find the difference for each problem below.

$$\begin{array}{r} 480 \\ -135 \\ \hline \end{array}$$

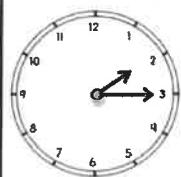
$$\begin{array}{r} 39 \\ -29 \\ \hline \end{array}$$

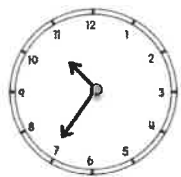
$$\begin{array}{r} 79 \\ -38 \\ \hline \end{array}$$



Time

Write the times shown on the clocks.







Shapes

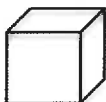
Answer the questions about the shapes below.

1.



___ sides
___ corners

2.

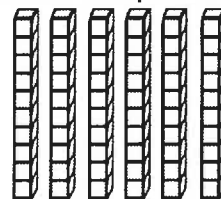


___ vertices
___ faces
___ edges



Place Value

Write how many tens and ones you have for each problem and write the problem in expanded form.



___ tens ___ ones =
___ + ___ = ___

Word Problem

Answer the problem below. Show your work.

April had 12 pens. Max had 14 pens.
Sam had 16 pens. How many pens
did they have altogether?

add

subtract

Fact Families

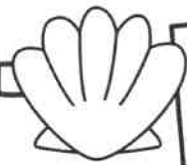
Using the numbers below, create a fact family.

37

24

13

___ + ___ = ___
___ + ___ = ___
___ - ___ = ___
___ - ___ = ___



Reading Comprehension

Alicia and Pam like to go to school. They get to learn new things and they get to see their friends. Both of them are in second grade with Mrs. Johnson. Alicia's favorite subject is science. She likes to learn about plants. Pam's favorite subject is math. She likes to see how fast she can add. Both of them love recess. Alicia likes the swings and Pam likes the slide. Alicia and Pam think that school is a lot of fun.



Read the story above. Use the story to answer the questions.

1. Why do you think that Alicia's favorite subject is science?

3. How are Alicia and Pam alike?

2. Why does Pam like math?

4. How are Alicia and Pam different?

Sentence Construction

Correct the sentences below. Rewrite them correctly.

1. how old is megans aunt



1. _____

2. didnt lesley help you find the dog

2. _____



Week 2: Day 2



Addition

Find the sums for each problem below.

526	39	56
$+285$	$+23$	$+27$
<hr/>	<hr/>	<hr/>
<input type="text"/>	<input type="text"/>	<input type="text"/>

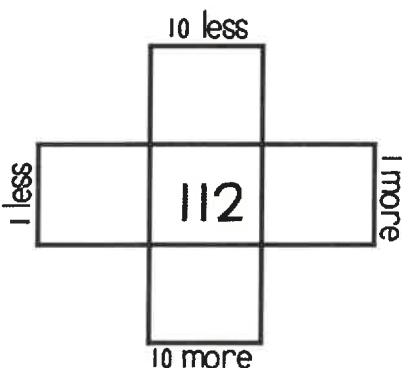
Subtraction

Find the difference for each problem below.

734	31	76
-246	-8	-29
<hr/>	<hr/>	<hr/>
<input type="text"/>	<input type="text"/>	<input type="text"/>

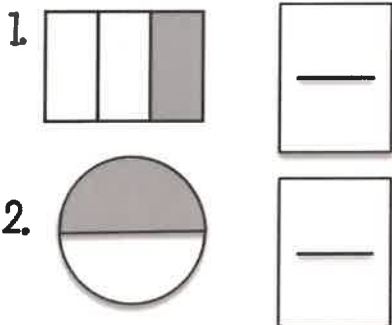
Multiples of 10

Write in the missing numbers.



Fractions

Answer the questions about the fractions below.



Odd/Even

Circle the odd numbers.

- | | |
|----|----|
| 44 | 31 |
| 98 | 80 |
| 75 | 53 |
| 32 | 65 |

Word Problem

Answer the problem below. Show your work.

Ann had 18 pieces of candy. She shared them with 3 friends. How many pieces did each friend get?


Fact Families

Using the numbers below, create a fact family.



$19 + \underline{\quad} = 53$
 $34 + 19 = \underline{\quad}$
 $53 - \underline{\quad} = 34$
 $\underline{\quad} - 34 = 19$

Week 2: Day 3



Dictionary Skills

Read the definitions. Decide which definition was used in the sentence.

ring

- a round object you wear on your finger(noun)
- the sound a phone makes(verb)

My ring is on my left hand.

- Definition 1
- Definition 2

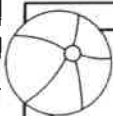


ABC Order

Put the 10 words in ABC Order.

grapes	orange
apple	pear
mango	fruit
banana	melon
cherry	berry

- _____
- _____
- _____
- _____
- _____
- _____
- _____
- _____
- _____
- _____



Pronouns

Circle the pronoun that can replace the underlined words.

The kids ran outside.

They

She

Tim walked home.

He

Him



Proper Nouns

Circle the words that need capital letters.

april

kid

monday

zack

too

lamp

christmas

may

light

friend



Compound Words

Circle the compound words below.

hamburger

funny

talking

popcorn

surfer

airport

sunflower

ladder

calling

firefly

Sentence Construction

Correct the sentences below. Rewrite them correctly.


1. robin likes dogs cats fishes and rabbits

1. _____


2. thanksgiving is in november

2. _____





Week 2: Day 3

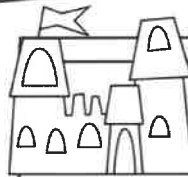


Addition

Find the sums for each problem below.

$$\begin{array}{r} 3321 \\ +5746 \\ \hline \end{array}$$

$$\begin{array}{r} 3971 \\ +2844 \\ \hline \end{array}$$

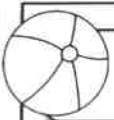


Subtraction

Find the difference for each problem below.

$$\begin{array}{r} 7512 \\ - 283 \\ \hline \end{array}$$

$$\begin{array}{r} 9325 \\ - 6185 \\ \hline \end{array}$$



Time

Write the times shown on the clocks.



Counting

Fill in the missing numbers.

600, 700, ____, ____, 1000

____, ____, 220, 230, ____

50, ____, 52, ____, ____

____, 85, ____, ____, 100



Money

Count the coins. Write your answer in the box.



Word Problem

Answer the problem below. Show your work.

Max found 18 seashells. He shared them with 6 friends. How many shells did each of his friends get?



Graphing

Use the graph below to answer the questions.

	2	4	6	8	10
Pizza					
Burger					

- How many kids chose pizza? ____
- How many kids chose burgers? ____
- How many kids voted in all? ____

Week 3: Day 1



Syllables

Put the 6 words in the correct box.

horses garden candy
grasshopper dinosaur notebook

2 syllables

3 syllables

ABC Order

Put the 10 words in ABC Order.

shovel	ocean
bucket	flip flops
shell	towel
popscicle	sun
waves	beach

1. _____
2. _____
3. _____
4. _____
5. _____
6. _____
7. _____
8. _____
9. _____
10. _____

Pronouns

Circle the pronoun that can replace the underlined words.

His mom made us pizza.

Her

She

I called Max on the phone.

he

him

Adjectives

Find the describing words.

cloudy big
eyes nice
floor and
call short
soft carpet

Root Words

Circle the root words below.

tell	tells
bigger	big
smiling	smile
eat	eating
sleep	sleeps

Sentence Construction

Correct the sentences below. Rewrite them correctly.


1. stephanie couldnt go to walmart

1. _____

2. meg wrote a letter on april 1, 2011

2. _____

Week 3: Day 1



Addition

Find the sums for each problem below.

$$\begin{array}{r} 541 \\ +249 \\ \hline \end{array}$$

$$\begin{array}{r} 83 \\ +34 \\ \hline \end{array}$$

$$\begin{array}{r} 60 \\ +37 \\ \hline \end{array}$$

Subtraction

Find the difference for each problem below.

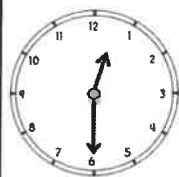
$$\begin{array}{r} 768 \\ -256 \\ \hline \end{array}$$

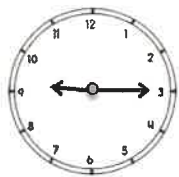
$$\begin{array}{r} 66 \\ -36 \\ \hline \end{array}$$

$$\begin{array}{r} 42 \\ -28 \\ \hline \end{array}$$

Time

Write the times shown on the clocks.





Shapes

Answer the questions about the shapes below.

1.



___ sides
___ vertices

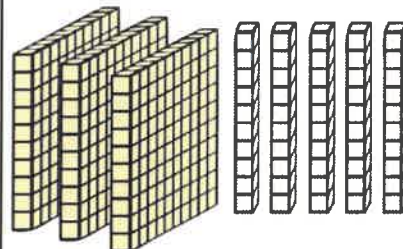
2.



___ vertices
___ faces
___ edges

Place Value

Write the answer in expanded form.



___ + ___ = ___

Word Problem

Answer the problem below. Show your work.

Cam had 10 baseballs. Max had 26 baseballs. Sam had 13 baseballs. How many baseballs did they have altogether?

add

subtract

Fact Families

Using the numbers below, create a fact family.

26

42



68

$$\underline{\quad} + \underline{\quad} = \underline{\quad}$$

$$\underline{\quad} + \underline{\quad} = \underline{\quad}$$

$$\underline{\quad} - \underline{\quad} = \underline{\quad}$$

$$\underline{\quad} - \underline{\quad} = \underline{\quad}$$



Reading Comprehension

Ben is my dog. He likes to bark at big trucks. He likes to catch his baseball. When he gets hungry, Ben pushes his dish to my feet. One day, I went outside to get the mail. When I came back inside I could not find Ben. I looked under my bed, in the bathroom, and in the kitchen. He was not in any of those places. All of a sudden, I heard a scratching noise and a bark. I ran to the door and opened it. Ben had followed me outside. I gave him a treat for waiting for me. Ben is a great dog!



Read the story above. Use the story to answer the questions.

1. What was the problem?

2. How would you search for your dog if it was missing?

3. Name two places the boy looked for Ben.

4. Where was Ben?

Sentence Construction

Correct the sentences below. Rewrite them correctly.

1. alicia cant eat onions beans or eggs



1. _____

2. did you see the boys horse run

2. _____



Week 3: Day 2



Addition

Find the sums for each problem below.

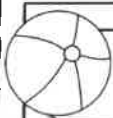
813	22	76
$+176$	$+30$	$+39$
_____	_____	_____



Subtraction

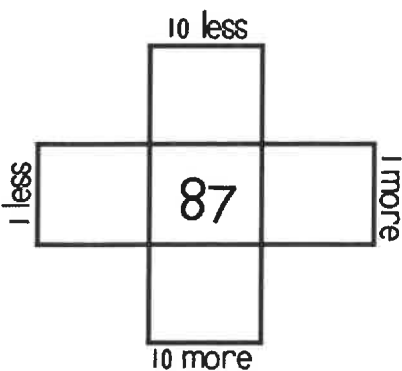
Find the difference for each problem below.

833	83	21
-457	-29	-9
_____	_____	_____





Multiples of 10

Write in the missing numbers.



Fractions

Answer the questions about the fractions below.



Odd/Even

Circle the even numbers.

- | | |
|----|----|
| 62 | 40 |
| 85 | 57 |
| 48 | 37 |
| 63 | 92 |

Word Problem

Answer the problem below. Show your work.

Kristen picked up 35 shells. Her sister picked up 16 shells. How many more shells did Kristen pick up than her sister?

add
subtract


_____ □ _____ = _____

Fact Families


Using the numbers below, create a fact family.

□	□	□
---	---	---

$16 + \underline{\quad} = 35$
 $16 + 19 = \underline{\quad}$
 $35 - \underline{\quad} = 16$
 $\underline{\quad} - 16 = 19$



Week 3: Day 3



Dictionary Skills

Read the definitions. Decide which definition was used in the sentence.

bat

1. an object used to hit a ball(noun)
2. an animal that flies at night(noun)

The **bat** lives in a cave.

- Definition 1
- Definition 2

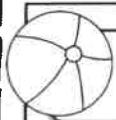


ABC Order

Put the 10 words in ABC Order.

rock	luck
sock	dock
lock	pack
tack	mock
crock	duck

1. _____
2. _____
3. _____
4. _____
5. _____
6. _____
7. _____
8. _____
9. _____
10. _____



Pronouns

Circle the pronoun that can replace the underlined words.

Zack and I went to dinner.

They

We

The tree was tall.

It

He



Proper Nouns

Circle the words that need capital letters.

jackson

ball

leaves

june

monday

lisa

ribbon

pens

october

glue



Prefixes

Circle the prefix in each word.

preface

unhelpful

mistake

review

mistreat

Sentence Construction

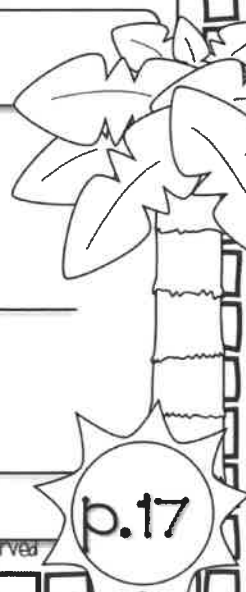
Correct the sentences below. Rewrite them correctly.

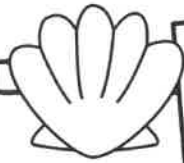
1. january an february arent hot months

1. _____


2. we went surfing in california

2. _____





Week 3: Day 3



Addition

Find the sums for each problem below.

$$\begin{array}{r} 423 \\ +289 \\ \hline \end{array}$$

$$\begin{array}{r} 52 \\ +54 \\ \hline \end{array}$$

$$\begin{array}{r} 31 \\ +47 \\ \hline \end{array}$$



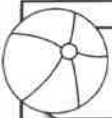
Subtraction

Find the difference for each problem below.

$$\begin{array}{r} 991 \\ -462 \\ \hline \end{array}$$

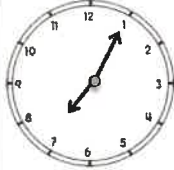
$$\begin{array}{r} 288 \\ -187 \\ \hline \end{array}$$

$$\begin{array}{r} 69 \\ -57 \\ \hline \end{array}$$



Time

Write the times shown on the clocks.



Counting


Fill in the missing numbers.

$110, 210, \underline{\quad}, \underline{\quad}, 510$

$\underline{\quad}, \underline{\quad}, 100, 105, \underline{\quad}$

$200, \underline{\quad}, 400, \underline{\quad}, \underline{\quad}$

$\underline{\quad}, 110, \underline{\quad}, \underline{\quad}, 113$



Money

Count the coins. Write your answer in the box.



Word Problem

Answer the problem below. Show your work.

Max caught 13 fish on Monday, 12 fish on Tuesday, and 14 fish on Wednesday. How many fish did he catch in all?

add

subtract

 $\underline{\quad} \square \underline{\quad} \square \underline{\quad} = \underline{\quad}$


Graphing

Use the graph below to answer the questions.

	5	10	15	20	25
Beach					
Camping					

- How many went to the beach? $\underline{\quad}$
- How many went camping? $\underline{\quad}$
- How many more went to the beach than camping? $\underline{\quad}$

Week 4: Day 1



Syllables

Put the words in the correct box.

flower jumping grandfather
computer ribbon paperclip

2 syllables

3 syllables

ABC Order

Put the 10 words in ABC Order.

ketchup	mustard
cheese	hotdog
tomato	pickles
hamburger	fries
chips	lettuce

1. _____
2. _____
3. _____
4. _____
5. _____
6. _____
7. _____
8. _____
9. _____
10. _____

Pronouns

Circle the pronoun that can replace the underlined words.

Did you catch the ball?

him

it

Kate and Matt run fast.

They

Them

Verbs

Circle the verbs (action words) below.

talked shirt

ate rolled

pancake shoes

blue eight

fan painted

Root Words

Circle the root words below.

walking

walk

hug

hugging

swim

swimming

touched

touch

type

typing

Sentence Construction

Correct the sentences below. Rewrite them correctly.


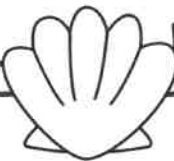
1. meg matt and julie at chips and hotdogs

1. _____

2. the boys went to burger king

2. _____

Week 4: Day 1



Addition

Find the sums for each problem below.

$$\begin{array}{r} 251 \\ +329 \\ \hline \end{array}$$

$$\begin{array}{r} 24 \\ +34 \\ \hline \end{array}$$

$$\begin{array}{r} 21 \\ +37 \\ \hline \end{array}$$



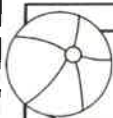
Subtraction

Find the difference for each problem below.

$$\begin{array}{r} 332 \\ -233 \\ \hline \end{array}$$

$$\begin{array}{r} 69 \\ -39 \\ \hline \end{array}$$

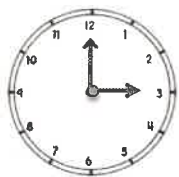
$$\begin{array}{r} 54 \\ -28 \\ \hline \end{array}$$



Time

Write the times shown on the clocks.







Shapes

Read the questions. Circle the answers for each question.

1.



What shape is this?
square
rectangle

2.




What shape is this?
hexagon
trapezoid



Place Value

Write the answer in expanded form.



_____ + _____ = _____

Word Problem

Answer the problem below. Show your work.

Zack had 12 hats. His brother gave him 12 more hats. How many hats does Zack have in all?

add

subtract

_____ □ _____ = _____

Fact Families

Using the numbers below, create a fact family.

30

64

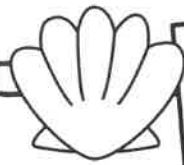
34

_____ + _____ = _____


_____ + _____ = _____

_____ - _____ = _____

_____ - _____ = _____



Week 4: Day 2



Reading Comprehension

Sam's favorite meal is breakfast. His favorite breakfast is eggs, pancakes, and bacon. Sometimes he eats cereal. Once a week, he eats grits and ham. He always drinks orange juice with his breakfast. The only thing he does not like is oatmeal. Sam thinks it is yuck. One time, his sister tried to trick him. She put a piece of cheese on top of oatmeal and told Sam that it was cheese grits. He took one bite and spit them out on the table. That was the only day that breakfast was not his favorite meal.



Read the story above. Use the story to answer the questions.

1. What is Sam's favorite meal? Why do you think that is his favorite meal?

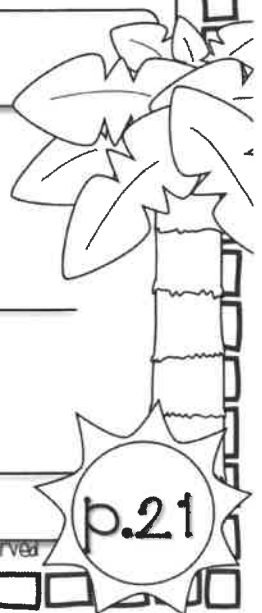
2. What did Sam's sister do to trick him? How do you think Sam felt?

3. What would you do if you ate something you didn't like?



Sentence Construction

Correct the sentences below. Rewrite them correctly.

1. its cold in the hug house
1. _____
2. marks game is on october 4 2013
2. _____



Week 4: Day 2



Addition

Find the sums for each problem below.

$$\begin{array}{r} 2467 \\ +3241 \\ \hline \end{array}$$

$$\begin{array}{r} 4768 \\ +3803 \\ \hline \end{array}$$

Subtraction

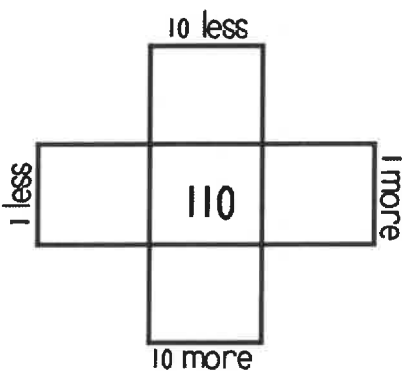
Find the difference for each problem below.

$$\begin{array}{r} 8500 \\ -4378 \\ \hline \end{array}$$

$$\begin{array}{r} 6450 \\ -2137 \\ \hline \end{array}$$

Multiples of 10

Write in the missing numbers.




Fractions

Answer the questions about the fractions below.

1.



2.



Odd/Even

Circle the odd numbers.

73

27

80

42

49

38

26

91

Word Problem

Answer the problem below. Show your work.

Jessica has 28 rings. She gave 13 to Meg. How many does she have now?

add

subtract



Fact Families

Using the numbers below, create a fact family.

$35 + \underline{\quad} = 70$

$70 - \underline{\quad} = 35$

Week 4: Day 3



Dictionary Skills

Read the definitions. Decide which definition was used in the sentence.

bat

1. an object used to hit a ball(noun)
2. an animal that flies at night(noun)

He used the bat to hit the ball.

- Definition 1
- Definition 2

ABC Order

Put the 10 words in ABC Order.

farm	pig
horse	cow
chickens	duck
tractor	hen
field	barn

1. _____
2. _____
3. _____
4. _____
5. _____
6. _____
7. _____
8. _____
9. _____
10. _____

Pronouns

Circle the pronoun that can replace the underlined words.

The cows ate grass.

They It

Did you see Meg?

she her

Adjectives

Circle the words that are adjectives.

four cool

running band

pink table

hard light

bed hammer

Compound Words

Circle the compound words below.

blackberry	computer
opened	peppermint
balloons	grasshopper
railroad	dresses
bedroom	airport

Sentence Construction

Correct the sentences below. Rewrite them correctly.



1. cant you call meg for me

1. _____

2. didnt you see the deer bears and snakes

2. _____

Week 4: Day 3



Addition

Find the sums for each problem below.

$$\begin{array}{r} 726 \\ +286 \\ \hline \end{array}$$

$$\begin{array}{r} 83 \\ +24 \\ \hline \end{array}$$

$$\begin{array}{r} 27 \\ +37 \\ \hline \end{array}$$

Subtraction

Find the difference for each problem below.

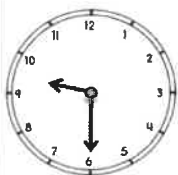
$$\begin{array}{r} 630 \\ -353 \\ \hline \end{array}$$

$$\begin{array}{r} 72 \\ -46 \\ \hline \end{array}$$

$$\begin{array}{r} 70 \\ -28 \\ \hline \end{array}$$

Time

Write the times shown on the clocks.





Counting

Fill in the missing numbers.

25, 30, ____, ____, 45

____, ____, 800, 900, ____

40, ____, 60, ____, ____

____, 102, ____, ____, 105

Money

Count the coins. Write your answer in the box.





Word Problem

Answer the problem below. Show your work.

Cam cooked 6 eggs and shared them with 2 friends. How many eggs did each friend get?


Graphing

Use the graph below to answer the questions.

	3	6	9	12	15
Cats					
Dogs					

- How many chose cats? ____
- How many more chose dogs than cats? ____
- How many voted in all? ____

Week 5: Day 1



Syllables

Put the 6 words in the correct box.

Kristen Angela Bobby
Jeremy Jennifer Steven

2 syllables

3 syllables

ABC Order

Put the 10 words in ABC Order.

triangle	cube
square	rectangle
circle	cylinder
pyramid	trapezoid
octagon	shape

1. _____
2. _____
3. _____
4. _____
5. _____
6. _____
7. _____
8. _____
9. _____
10. _____

Articles

Circle the article that can be used to complete the sentence.

____ cow drank water.

The

An

I want to eat ____
apple.

a

an

Nouns

Find the people, places, and things.

cows

blue

friends

yawned

pencil

markers

skipped

found

plates

bread

Suffixes

Circle the suffix in each word.

excitable

inventor

careless

happily

translator

Sentence Construction

Correct the sentences below. Rewrite them correctly.



1. tomorrow is august 9 2013

1. _____

2. the mans dog swam in the river

2. _____

Week 5: Day 1



Addition

Find the sums for each problem below.

$$\begin{array}{r} 520 \\ +399 \\ \hline \end{array}$$

$$\begin{array}{r} 41 \\ +48 \\ \hline \end{array}$$

$$\begin{array}{r} 70 \\ +19 \\ \hline \end{array}$$



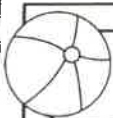
Subtraction

Find the difference for each problem below.

$$\begin{array}{r} 777 \\ -289 \\ \hline \end{array}$$


$$\begin{array}{r} 38 \\ -16 \\ \hline \end{array}$$

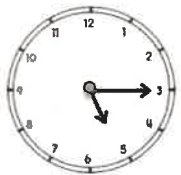
$$\begin{array}{r} 62 \\ -37 \\ \hline \end{array}$$



Time

Write the times shown on the clocks.







Shapes

Read the questions. Circle the answers for each question.

1.



What shape is this?

2.

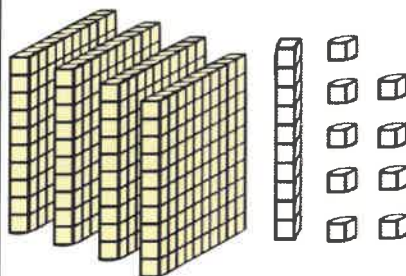


What shape is this?



Place Value

Write the answer in expanded form.


 + + =

Word Problem

Answer the problem below. Show your work.

Jessica picked 32 flowers. She gave some away. She has 18 left. How many did she give away?

add

subtract

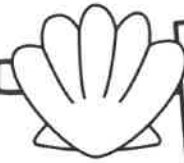
 =

Fact Families

Using the numbers below, create a fact family.

24	11	13
----	----	----

___	+	___	=	___
___	+	___	=	___
___	-	___	=	___
___	-	___	=	___



Reading Comprehension

Nick, Max, and Tim wanted to make pizza for dinner. First, they went to the store and bought the items they needed. Next, Nick and Max rolled out the dough on a pan. Then, Tim put on sauce, cheese, and pepperoni. After that, they put the pizza in the oven and waited for the pizza to cook. Finally, they pulled the pizza out of the oven, put it on their plates, and ate it.



Read the story above. Use the story to answer the questions.

1. Write down the steps the kids took to make the pizza.

2. What do you think the kids did after they finished eating?

Sentence Construction

Correct the sentences below. Rewrite them correctly.

1. sue cat and bo ate at pizza hut



1. _____

2. cant you call fred and fran

2. _____



Week 5: Day 2



Addition

Find the sums for each problem below.

$$\begin{array}{r} 278 \\ +333 \\ \hline \end{array}$$

$$\begin{array}{r} 89 \\ +50 \\ \hline \end{array}$$

$$\begin{array}{r} 60 \\ +49 \\ \hline \end{array}$$



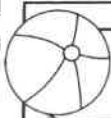
Subtraction

Find the difference for each problem below.

$$\begin{array}{r} 800 \\ -263 \\ \hline \end{array}$$

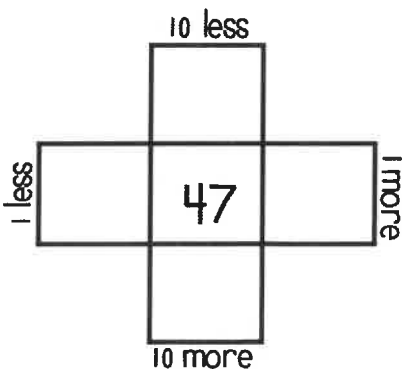
$$\begin{array}{r} 59 \\ -37 \\ \hline \end{array}$$

$$\begin{array}{r} 42 \\ -7 \\ \hline \end{array}$$



Multiples of 10

Write in the missing numbers.



True/False

Circle the problems below that are true.

1. $5+9 = 18$

2. $9+7 = 16$

3. $9+9 = 18$

4. $6+5 = 10$



Odd/Even

Circle the even numbers.

18 10

96 7

61 126

29 43

Word Problem

Answer the problem below. Show your work.

Nan has 26 flowers. She gave 12 to her sister. How many flowers does she have left?

add
subtract

=

Fact Families



Using the numbers below, create a fact family.

$14 + \underline{\quad} = 73$

$14 + 59 = \underline{\quad}$

$73 - \underline{\quad} = 59$

$\underline{\quad} - 59 = 14$



Dictionary Skills

Read the definitions. Decide which definition was used in the sentence.

trip

1. to go on a vacation(noun)
2. to fall over something(verb)

The family took a trip to the beach.

- Definition 1
- Definition 2

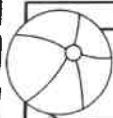


ABC Order

Put the 10 words in ABC Order.

pencil	book
desk	glue
stapler	crayons
paper	eraser
chalk	tape

1. _____
2. _____
3. _____
4. _____
5. _____
6. _____
7. _____
8. _____
9. _____
10. _____



Articles

Circle the article that can be used to complete the sentence.

She drew ____ ant.

a

an

Will he throw ____ ball?

the

an



Pronouns

Circle the words that are pronouns.

pen

them

clip

he

it

called

they

me

shorts

staple



Compound Words

Circle the compound words below.

seashore

winner

himself

matched

hurry

earring

earthquake

taken

closed

toothpick

Sentence Construction

Correct the sentences below. Rewrite them correctly.

1. who cooked zacks dinner



1. _____

2. sam fran and meg went to eat

2. _____



Week 5: Day 3



Addition

Find the sums for each problem below.

$$\begin{array}{r} 294 \\ +337 \\ \hline \end{array}$$

$$\begin{array}{r} 92 \\ +33 \\ \hline \end{array}$$

$$\begin{array}{r} 50 \\ +49 \\ \hline \end{array}$$



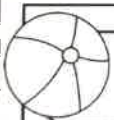
Subtraction

Find the difference for each problem below.

$$\begin{array}{r} 820 \\ -452 \\ \hline \end{array}$$

$$\begin{array}{r} 39 \\ -17 \\ \hline \end{array}$$

$$\begin{array}{r} 56 \\ -35 \\ \hline \end{array}$$



Time

Write the times shown on the clocks.







Counting

Fill in the missing numbers.

19, 20, ____, ____, 23, ____

____, ____, 300, 400, ____

40, ____, 50, ____, ____

____, 100, ____, ____, 103



Money

Count the coins. Write your answer in the box.



Word Problem

Answer the problem below. Show your work.

I have 13 pieces of gum, 14 pieces of chocolate, and 25 gummy bears. How many pieces of candy do I have in all?

add

subtract

 =



Graphing

Use the graph below to answer the questions.

	1	2	3	4	5
Sausage					
Cheese					

- How many kids chose sausage? ____
- How many kids chose cheese? ____
- How many voted in all? ____

Week 6: Day 1



Syllables

Put the 6 words in the correct box.

monkey window reminder

paintbrush strawberry bicycle

2 syllables

3 syllables

Empty box for words with 2 syllables.

Empty box for words with 3 syllables.

ABC Order

Put the 10 words in ABC Order.

soccer	tennis
football	golf
basketball	hockey
baseball	karate
sports	running

1. _____
2. _____
3. _____
4. _____
5. _____
6. _____
7. _____
8. _____
9. _____
10. _____

Articles

Circle the article that can be used to complete the sentence.

___ birds flew in the sky.

The

A

The team ate ___ pizzas.

the

a

Nouns

Find the people, places, and things.

sister

an

white

glasses

nose

fingers

green

socks

draws

phone

Root Words

Circle the root words below.

cry	crying
counted	count
talking	talk
edit	editing
eaten	eat

Sentence Construction

Correct the sentences below. Rewrite them correctly.



1. tim asked can you bring me water

1. _____

2. mike said ben threw the football

2. _____

Week 6: Day 1



Addition

Find the sums for each problem below.

$$\begin{array}{r} 5367 \\ +2834 \\ \hline \end{array}$$

$$\begin{array}{r} 2035 \\ +3744 \\ \hline \end{array}$$

Subtraction

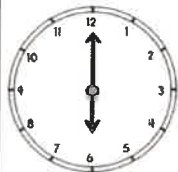
Find the difference for each problem below.

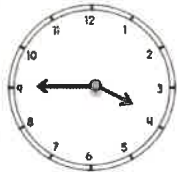
$$\begin{array}{r} 7490 \\ -1481 \\ \hline \end{array}$$

$$\begin{array}{r} 8875 \\ -2657 \\ \hline \end{array}$$

Time

Write the times shown on the clocks.





Shapes

Read the questions. Circle the answers for each question.

1.



What shape is this?


2.



What shape is this?

Place Value

Write the answer in expanded form.



_____ + _____ = _____

Word Problem

Answer the problem below. Show your work.

Kim has 34 coins. She gave 16 of them to Molly. How many does she have left?

add

subtract



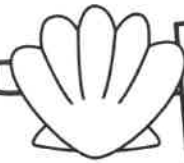
_____ □ _____ = _____

Fact Families

Using the numbers below, create a fact family.

39 52 91

_____ + _____ = _____
 _____ + _____ = _____
 _____ - _____ = _____
 _____ - _____ = _____



Reading Comprehension

Lisa wants to go outside to play, but it is very cold. She puts on her coat, mittens, hat, and boots. Then, she runs out the door. There is snow everywhere. Lisa's friend Grace comes over to play. They decide they want to build a huge snowman. First, they roll the snow into three big balls. Then, they stacked the balls up and put sticks, eyes, a nose, and a hat on the snowman. When they finished building the snowman, the girls were cold. They went in Lisa's house and sat next to the fire. The girls had a fun, cold day.



Read the story above. Use the story to answer the questions.

1. What does Lisa have to do before she can build the snowman?

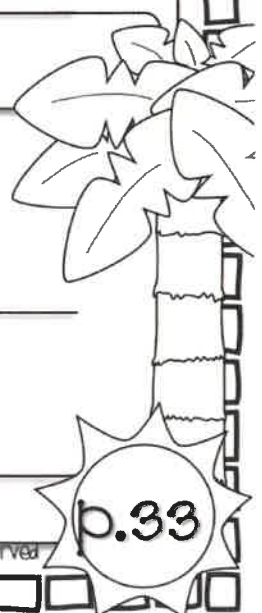
2. What would you do if you saw a lot of snow?

3. What steps did the girls take to build the snowman?



Sentence Construction

Correct the sentences below. Rewrite them correctly.

1. i left mine book papers and pen at home
1. _____
2. didnt matt ride the horse
2. _____



Week 6: Day 2



Addition

Find the sums for each problem below.

$$\begin{array}{r} 430 \\ +259 \\ \hline \end{array}$$

$$\begin{array}{r} 36 \\ +54 \\ \hline \end{array}$$

$$\begin{array}{r} 51 \\ +28 \\ \hline \end{array}$$

Subtraction

Find the difference for each problem below.

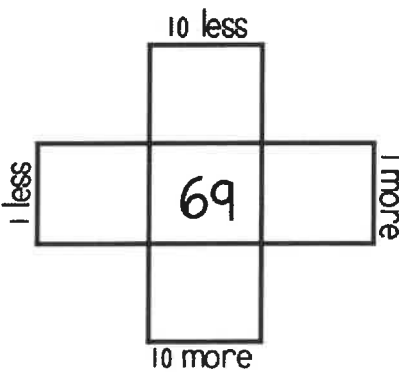
$$\begin{array}{r} 560 \\ -353 \\ \hline \end{array}$$

$$\begin{array}{r} 49 \\ -28 \\ \hline \end{array}$$

$$\begin{array}{r} 63 \\ -34 \\ \hline \end{array}$$

Multiples of 10

Write in the missing numbers.



True/False

Circle the problems below that are true.

1. $9+7 = 17$

2. $8+7 = 15$

3. $9+4 = 12$

4. $10+10 = 20$

Odd/Even

Circle the odd numbers.

32 83

132 99

95 124

47 60

Word Problem

Answer the problem below. Show your work.

Matt had 16 coins. He shared them with 4 friends. How many coins did each friend get?

Fact Families

Using the numbers below, create a fact family.

<input type="text"/>	<input type="text"/>	<input type="text"/>
----------------------	----------------------	----------------------



$9 + \underline{\quad} = 15$

$6 + 9 = \underline{\quad}$

$15 - \underline{\quad} = 9$

$\underline{\quad} - 9 = 6$

Week 6: Day 3



Dictionary Skills

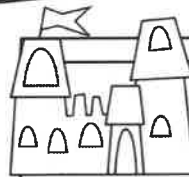
Read the definitions. Decide which definition was used in the sentence.

bowl

1. an object used hold food(noun)
2. roll a ball along the ground(verb)

Pour the cereal in a bowl.

- Definition 1
- Definition 2

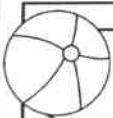


ABC Order

Put the 10 words in ABC Order.

ocean	seaweed
fish	clams
dolphin	whale
shark	oyster
reef	mussels

1. _____
2. _____
3. _____
4. _____
5. _____
6. _____
7. _____
8. _____
9. _____
10. _____



Articles

Circle the article that can be used to complete the sentence.

She ate _____ biscuit.

a

an

_____ girls played cards.

A

The



Pronouns

Circle the words that are pronouns.

her

I

the

beard

them

him

dots

talks

you

we



Irregular Plurals

Circle the irregular plural nouns.

foot	feet
teeth	tooth
children	child
man	men
mouse	mice

Sentence Construction

Correct the sentences below. Rewrite them correctly.

1. the squirrel clumbed the tree



1. _____

2. what is your favorite food tim asked

2. _____



Week 6: Day 3



Addition

Find the sums for each problem below.

$$\begin{array}{r} 294 \\ +286 \\ \hline \end{array}$$

$$\begin{array}{r} 51 \\ +37 \\ \hline \end{array}$$

$$\begin{array}{r} 32 \\ +36 \\ \hline \end{array}$$

Subtraction

Find the difference for each problem below.

$$\begin{array}{r} 488 \\ -208 \\ \hline \end{array}$$

$$\begin{array}{r} 60 \\ -53 \\ \hline \end{array}$$

$$\begin{array}{r} 79 \\ -47 \\ \hline \end{array}$$

Time

Write the times shown on the clocks.





Counting

Fill in the missing numbers.

500, 510, _____, _____, _____

_____, _____, 80, 85, _____

190, _____, 210, _____, _____

_____, 99, _____, _____, 102

Money

Count the coins. Write your answer in the box.





Word Problem

Answer the problem below. Show your work.

My brother ate 14 French fries, 6 chicken fingers, and 2 ice creams.

How much did he eat in all?

add

subtract

$$\square + \square + \square = \square$$



Graphing

Use the graph below to answer the questions.

	2	4	6	8	10
Cookies					
Cake					

- How many more chose cake than cookies? _____
- How many kids chose cookies? _____
- How many voted in all? _____

Week 7: Day 1



Syllables

Put the 6 words in the correct box.

early spaghetti microphone

Cardinal baker snowing

2 syllables

3 syllables

ABC Order

Put the 10 words in ABC Order.

match	catch
hitch	stitch
patch	ditch
hatch	batch
itch	hatch

1. _____
2. _____
3. _____
4. _____
5. _____
6. _____
7. _____
8. _____
9. _____
10. _____

Nouns & Verbs

Circle the correct verb for the noun.

We took a _____.

walk

walks

The boys _____.

talk

talks

Proper Nouns

Find the specific people, places, and things.

Walmart

stool

trees

Mrs. Smith

sun

Lily

Texas

grass

Sunday

May

Singular Nouns

Circle the singular nouns.

boys

boy

toy

toys

bird

birds

chairs

chair

animals

animal

Sentence Construction

Correct the sentences below. Rewrite them correctly.



1. maxs birthday is april 4 2000

1. _____

2. did you see the bear cade asked

2. _____

Week 7: Day 1



Addition

Find the sums for each problem below.

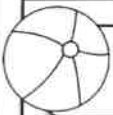
528	28	76
$+264$	$+ 4$	$+32$
□	□	□



Subtraction

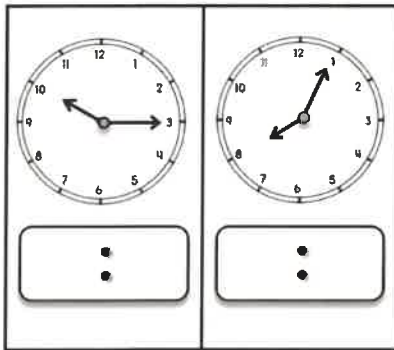
Find the difference for each problem below.

836	89	75
$- 456$	$- 56$	$- 27$
□	□	□



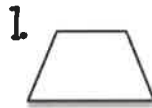
Time

Write the times shown on the clocks.



Shapes


Read the questions. Circle the answers for each question.



What shape is this?

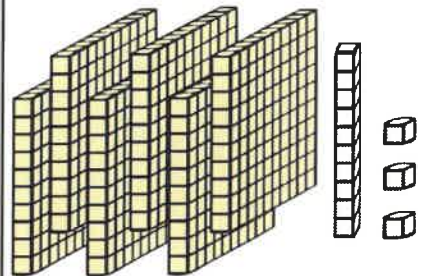


What shape is this?



Place Value

Write the answer in expanded form.



_____ + _____ = _____

Word Problem



Answer the problem below. Show your work.

Pam had 15 pieces of candy. She gave them to 3 friends. How many pieces of candy did each friend get?

Fact Families

Using the numbers below, create a fact family.

20	25	45
_____	+	_____ = _____
_____	+	_____ = _____
_____	-	_____ = _____
_____	-	_____ = _____



Reading Comprehension

Billy the rabbit likes to play outside. His favorite thing to do is eat carrots. One day, Billy hopped through the grass into Mrs. Smith's yard. He spotted a bit of orange sticking out of the ground. He hopped around a tree, down the hill, and slid under the fence. Billy jumped on top of the orange thing sticking out of the ground. He got a huge surprise! It was not a carrot. It was an orange paint stick. Billy hopped out of the garden without a tasty snack.



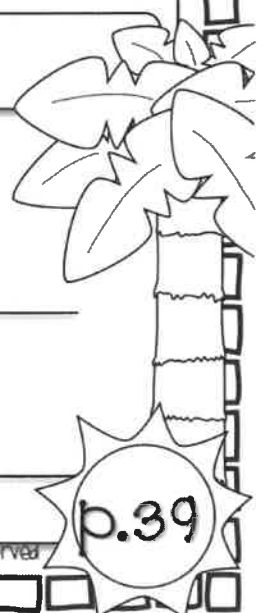
Read the story above. Use the story to answer the questions.

- | | |
|--|---|
| <p>1. What is Billy's favorite thing to do? Why?</p> <p>_____</p> <p>_____</p> | <p>4. What was the surprise?</p> <p>_____</p> <p>_____</p> |
| <p>2. Why do you think Billy cared about the color orange?</p> <p>_____</p> <p>_____</p> | <p>5. How do you think Billy felt? Why?</p> <p>_____</p> <p>_____</p> |



Sentence Construction

Correct the sentences below. Rewrite them correctly.

1. debbies lunch was meatloaf and potatoes
1. _____
2. can you call mary tim and luke tonight
2. _____



Week 7: Day 2



Addition

Find the sums for each problem below.

$$\begin{array}{r} 4540 \\ +2468 \\ \hline \end{array}$$

$$\begin{array}{r} 5231 \\ +2748 \\ \hline \end{array}$$

Subtraction

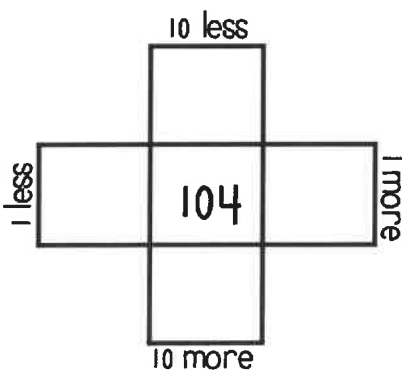
Find the difference for each problem below.

$$\begin{array}{r} 8469 \\ - 458 \\ \hline \end{array}$$

$$\begin{array}{r} 7058 \\ - 3451 \\ \hline \end{array}$$

Multiples of 10

Write in the missing numbers.



True/False

Circle the problems below that are false.

1. $2+13 = 16$

2. $9+8 = 17$

3. $6+6 = 12$

4. $5+8 = 14$

Odd/Even

Circle the even numbers.

50 121

31 72

89 57

50 88

Word Problem

Answer the problem below. Show your work.

Kate had 36 pieces of candy. She gave 13 pieces of candy to Matt. How much candy does Kate left?

add

subtract

=

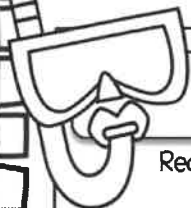


Fact Families

Using the numbers below, create a fact family.

$46 + \underline{\quad} = 92$

$92 - \underline{\quad} = 46$

Week 7: Day 3



Dictionary Skills


Read the definitions. Decide which definition was used in the sentence.

coat

1. a jacket (noun)
2. a layer of paint (noun)

The wall has a new coat of paint.

- Definition 1
- Definition 2

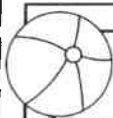


ABC Order

Put the 10 words in ABC Order.

happy	sad
afraid	careful
joy	hurt
kind	angry
unhappy	keen

1. _____
2. _____
3. _____
4. _____
5. _____
6. _____
7. _____
8. _____
9. _____
10. _____



Adjectives

Circle the adjectives in each sentence.

My yellow shovel fell in the wet sand.

The boy ate the crunchy chips.



Pronouns

Circle the words that are pronouns.

her	the
them	it
cars	him
ants	call
they	she



Irregular Plurals

Circle the compound words below.

fish	fishes
mouse	mice
womans	women
deers	deer
geese	gooses

Sentence Construction

Correct the sentences below. Rewrite them correctly.

1. where are thay going on july 4 2013

1. _____

2. did pam lisa and alicia watch the movie

2. _____



Week 7: Day 3



Addition

Find the sums for each problem below.

$$\begin{array}{r} 547 \\ +246 \\ \hline \end{array}$$

$$\begin{array}{r} 50 \\ +49 \\ \hline \end{array}$$

$$\begin{array}{r} 36 \\ +92 \\ \hline \end{array}$$

Subtraction

Find the difference for each problem below.

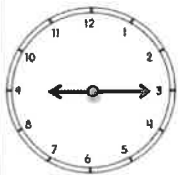
$$\begin{array}{r} 970 \\ -243 \\ \hline \end{array}$$

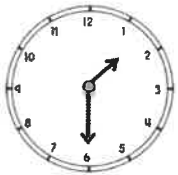
$$\begin{array}{r} 73 \\ -35 \\ \hline \end{array}$$

$$\begin{array}{r} 49 \\ -19 \\ \hline \end{array}$$

Time

Write the times shown on the clocks.





Counting

Fill in the missing numbers.

200, ____, ____, 500, ____

____, ____, 630, 640, ____

400, ____, 600, ____, ____

____, 89, ____, ____, 92

Money

Count the coins. Write your answer in the box.





Word Problem

Answer the problem below. Show your work.

It takes 10 hours a week to do math, 5 hours to do science, and 14 hours to do reading. How many hours does it take to do all the subjects?

add

subtract

___ □ ___ □ ___ = ___



Graphing

Use the graph below to answer the questions.

	1	2	3	4	5	6	7
apples							
bananas							
oranges							

- How many chose apples and bananas? ____
- How many chose apples? ____
- How many voted in all? ____

Week 8: Day 1



Syllables

Put the 6 words in the correct box.

rabbit umbrella rainy
dishwasher everyone growing

2 syllables

3 syllables

ABC Order

Put the 10 words in ABC Order.

tomato	lettuce
potato	squash
beans	carrots
onion	broccoli
cucumber	garlic

1. _____
2. _____
3. _____
4. _____
5. _____
6. _____
7. _____
8. _____
9. _____
10. _____

Nouns & Verbs

Circle the correct verb for the noun.

My arm _____.

hurt

hurts

The garden _____ fast.

grow

grows

Proper Nouns

Find the specific people, places, and things.

man Zack

Olive Garden store

Italy river

girl Mrs. Sims

Old Navy school

Plural Nouns

Circle the plural nouns.

bee

bees

dogs

dog

goats

goat

horses

horse

cow

cows

Sentence Construction

Correct the sentences below. Rewrite them correctly.


1. lindas cake cookies and chips taste great

1. _____

2. may made pasta salad and bread for lunch

2. _____

Week 8: Day 1



Addition

Find the sums for each problem below.

$$\begin{array}{r} 376 \\ +382 \\ \hline \end{array}$$

$$\begin{array}{r} 45 \\ +55 \\ \hline \end{array}$$

$$\begin{array}{r} 87 \\ +32 \\ \hline \end{array}$$



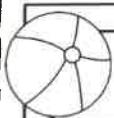
Subtraction

Find the difference for each problem below.

$$\begin{array}{r} 768 \\ -567 \\ \hline \end{array}$$

$$\begin{array}{r} 35 \\ -21 \\ \hline \end{array}$$

$$\begin{array}{r} 57 \\ -35 \\ \hline \end{array}$$



Time

Write the times shown on the clocks.








Shapes

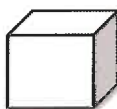
Read the questions. Circle the answers for each question.

1.



What shape is this?

2.

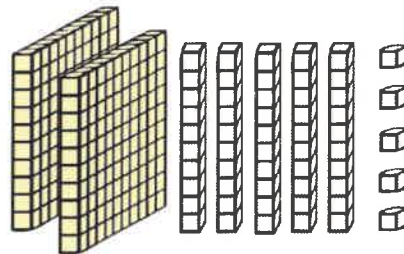


What shape is this?



Place Value

Write the answer in expanded form.



_____ + _____ = _____

Word Problem

Answer the problem below. Show your work.

Max ate 42 apple slices. Cam ate 13 apple slices. How many apple slices did they eat altogether?

add

subtract

Fact Families

Using the numbers below, create a fact family.

32

68



100

$$\underline{\quad} + \underline{\quad} = \underline{\quad}$$

$$\underline{\quad} + \underline{\quad} = \underline{\quad}$$

$$\underline{\quad} - \underline{\quad} = \underline{\quad}$$

$$\underline{\quad} - \underline{\quad} = \underline{\quad}$$



Reading Comprehension

Nick and Joe went swimming in the ocean. They put their heads under water. Both of them opened their eyes. "Ouch!" cried Joe. "The water burned my eyes!" said Nick. They ran back to their towels and grabbed their goggles. Nick and Joe dove back into the water. They stuck their heads under water and saw lots of little fish. Joe saw a huge shell and grabbed it. Nick saw a shell, too. "Ouch!" Nick yelled. Joe looked at Nick's hand. There was a tiny red mark. Nick had accidentally grabbed a tiny crab.



Read the story above. Use the story to answer the questions.

- | | |
|---|---|
| <p>1. What was the problem in the beginning?</p> <p>_____</p> <p>_____</p> | <p>4. How did they solve the problem?</p> <p>_____</p> <p>_____</p> |
| <p>2. Why do you think the water burned their eyes?</p> <p>_____</p> <p>_____</p> | <p>5. How do you think Nick felt at the end? Why?</p> <p>_____</p> <p>_____</p> |

Sentence Construction

Correct the sentences below. Rewrite them correctly.

1. logan max and ben like baseball



1. _____

2. cant you talk to megan

2. _____



Week 8: Day 2



Addition

Find the sums for each problem below.

$$\begin{array}{r} 2520 \\ +3678 \\ \hline \end{array}$$

$$\begin{array}{r} 4180 \\ +1783 \\ \hline \end{array}$$

Subtraction

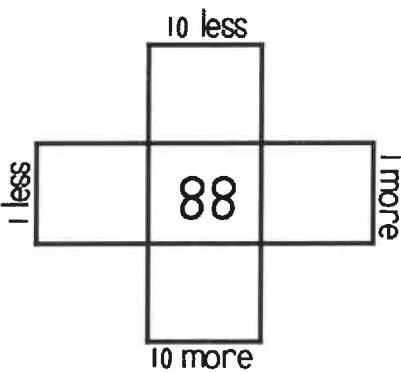
Find the difference for each problem below.

$$\begin{array}{r} 4780 \\ -2652 \\ \hline \end{array}$$

$$\begin{array}{r} 7000 \\ -3250 \\ \hline \end{array}$$

Multiples of 10

Write in the missing numbers.



True/False

Circle the problems below that are false.

1. $5+5 = 10$

2. $7+5 = 11$

3. $3+6 = 10$

4. $9+5 = 14$

Odd/Even

Circle the odd numbers.

43 52

136 96

85 79

97 123

Word Problem

Answer the problem below. Show your work.

James ran 20 miles in 4 days. How many miles did he run each day?

Fact Families

Using the numbers below, create a fact family.

<input type="text"/>	<input type="text"/>	<input type="text"/>
----------------------	----------------------	----------------------



$48+59 = \underline{\quad}$

$48+ \underline{\quad} = 107$

$107 - \underline{\quad} = 48$

$\underline{\quad} - 48 = 59$

Week 8: Day 3



Dictionary Skills

Read the definitions. Decide which definition was used in the sentence.

saw

- to see something (verb)
- a tool used to cut items (noun)

Zack used a saw to cut the tree.

- Definition 1
- Definition 2

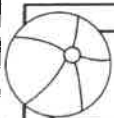


ABC Order

Put the 10 words in ABC Order.

animals	cabin
tent	forest
backpack	adventure
kayak	outside
oar	trees

- _____
- _____
- _____
- _____
- _____
- _____
- _____
- _____
- _____
- _____



Adjectives

Circle the adjectives in each sentence.

The green grass needs to be cut.

My sweet teacher gave me a sharp pencil.



Pronouns

Circle the words that are pronouns.

- | | |
|------|-------|
| I | he |
| dog | shirt |
| them | box |
| it | hair |
| her | apple |



Compound Words

Circle the compound words below.

birdhouse	careful
ball	band
something	anyone
draws	inside
talking	butterfly

Sentence Construction

Correct the sentences below. Rewrite them correctly.

1. jacks book fell out of the car



1. _____

2. susan linda and pam like to paint

2. _____



Week 8: Day 3



Addition

Find the sums for each problem below.

$$\begin{array}{r} 240 \\ +586 \\ \hline \end{array}$$

$$\begin{array}{r} 40 \\ +69 \\ \hline \end{array}$$

$$\begin{array}{r} 37 \\ +38 \\ \hline \end{array}$$

Subtraction

Find the difference for each problem below.

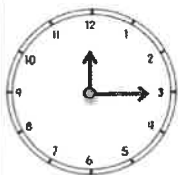
$$\begin{array}{r} 640 \\ -238 \\ \hline \end{array}$$

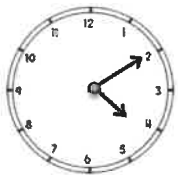
$$\begin{array}{r} 69 \\ -38 \\ \hline \end{array}$$

$$\begin{array}{r} 52 \\ -24 \\ \hline \end{array}$$

Time

Write the times shown on the clocks.





Counting

Fill in the missing numbers.

45, 46, ____, ____, 49, ____

____, ____, 820, 830, ____

85, ____, 95, ____, ____

____, 101, ____, ____, 104

Money

Count the coins. Write your answer in the box.





Word Problem

Answer the problem below. Show your work.

The boy collected 14 bananas, 12 apples, and 10 oranges. How much fruit did he collect in all?

add

subtract


Graphing

Use the graph below to answer the questions.

	1	2	3	4	5	6	7
giraffes							
lions							
hippos							

- How many chose giraffes and hippos? _____
- How many chose lions? _____
- How many voted in all? _____

Week 9: Day 1



Syllables

Put the 6 words in the correct box.

flowerbed necklace summertime
eyebrow table broccoli

2 syllables

3 syllables

ABC Order

Put the 10 words in ABC Order.

Zack	Melissa
Mary	Jason
Kristen	Beth
Jessica	Lesley
Tim	Alicia

1. _____
2. _____
3. _____
4. _____
5. _____
6. _____
7. _____
8. _____
9. _____
10. _____

Nouns & Verbs

Circle the correct verb for the noun.

The gate _____.	
close	closed

The animals _____ hay.	
eat	eats

Nouns

Circle people, places, and things.

baby	zoo
call	tiny
rug	the
bags	white
six	paper

Plural Nouns

Circle the plural nouns.

store	stores
ring	rings
planes	plane
phone	phones
oranges	orange

Sentence Construction

Correct the sentences below. Rewrite them correctly.



1. can you draw a pigs horses and sheeps

1. _____

2. tim plays golf tennis and baseball

2. _____

Week 9: Day 1



Addition

Find the sums for each problem below.

$$\begin{array}{r} 724 \\ +283 \\ \hline \end{array}$$

$$\begin{array}{r} 79 \\ +54 \\ \hline \end{array}$$

$$\begin{array}{r} 51 \\ +88 \\ \hline \end{array}$$



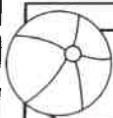
Subtraction

Find the difference for each problem below.

$$\begin{array}{r} 630 \\ -340 \\ \hline \end{array}$$

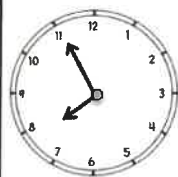
$$\begin{array}{r} 59 \\ -37 \\ \hline \end{array}$$

$$\begin{array}{r} 21 \\ -8 \\ \hline \end{array}$$



Time

Write the times shown on the clocks.







Shapes

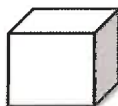
Read the questions. Circle the answers for each question.

1.



What shape is this?

2.

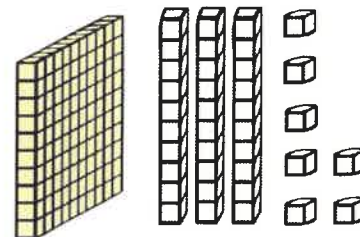


What shape is this?



Place Value

Write the answer in expanded form.



$$\underline{\hspace{1cm}} + \underline{\hspace{1cm}} + \underline{\hspace{1cm}} = \underline{\hspace{1cm}}$$

Word Problem

Answer the problem below. Show your work.

Gabe scored 34 points in his game Friday and 17 points in his game Saturday. How many points did he score in all?

add

subtract

$$\underline{\hspace{1cm}} \square \underline{\hspace{1cm}} = \underline{\hspace{1cm}}$$

Fact Families

Using the numbers below, create a fact family.

16

17


33

$$\underline{\hspace{1cm}} + \underline{\hspace{1cm}} = \underline{\hspace{1cm}}$$

$$\underline{\hspace{1cm}} + \underline{\hspace{1cm}} = \underline{\hspace{1cm}}$$

$$\underline{\hspace{1cm}} - \underline{\hspace{1cm}} = \underline{\hspace{1cm}}$$

$$\underline{\hspace{1cm}} - \underline{\hspace{1cm}} = \underline{\hspace{1cm}}$$



Reading Comprehension

Grace wanted to paint a picture. She went to her desk and pulled out white paper and her paint set. She took her brush and touched the yellow. Then, she touched her paper, but nothing was there. Oops! Grace forgot to get water to wet her paintbrush. She went to the kitchen and filled a glass with water. Then, she dipped the tip of her paintbrush into the water. Grace touched the yellow again and touched the paper. This time there was a bright yellow circle.



Read the story above. Use the story to answer the questions.

- | | |
|--|--|
| <p>1. Who is the main character in the story?</p> <p>_____</p> | <p>4. How did she solve the problem?</p> <p>_____</p> <p>_____</p> |
| <p>2. What was the problem?</p> <p>_____</p> <p>_____</p> <p>_____</p> | <p>5. What do you think Grace painted with the yellow paint? Why?</p> <p>_____</p> <p>_____</p> <p>_____</p> |

Sentence Construction

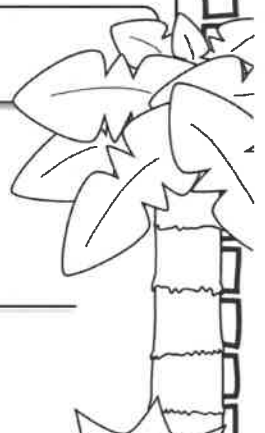
Correct the sentences below. Rewrite them correctly.

1. didnt the lemonade tasts good



1. _____

2. how old will you be may 5 2013

2. _____



Week 9: Day 2



Addition

Find the sums for each problem below.

$$\begin{array}{r} 629 \\ +236 \\ \hline \end{array}$$

$$\begin{array}{r} 83 \\ +59 \\ \hline \end{array}$$

$$\begin{array}{r} 74 \\ +37 \\ \hline \end{array}$$

Subtraction

Find the difference for each problem below.

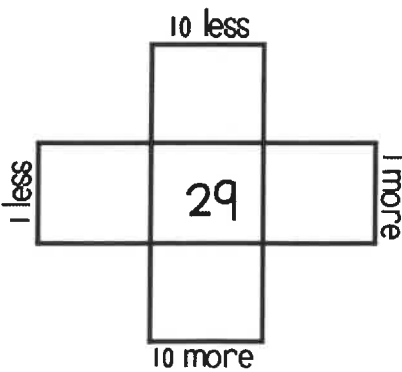
$$\begin{array}{r} 721 \\ -362 \\ \hline \end{array}$$

$$\begin{array}{r} 57 \\ -39 \\ \hline \end{array}$$

$$\begin{array}{r} 92 \\ -36 \\ \hline \end{array}$$

Multiples of 10

Write in the missing numbers.



True/False

Circle the problems below that are true.

1. $8+7 = 14$

2. $5+6 = 11$

3. $9+3 = 12$

4. $7+7 = 15$

Odd/Even

Circle the even numbers.

134

70

75

83

89

67

48

126

Word Problem

Answer the problem below. Show your work.

Ann has 10 coins. She shared them with 2 friends. How many did she give each friend?

Fact Families

Using the numbers below, create a fact family.



$37+28 = \underline{\quad}$

$37+ \underline{\quad} = 65$

$65 - \underline{\quad} = 37$

$\underline{\quad} - 37 = 28$

Week 9: Day 3



Dictionary Skills

Read the definitions. Decide which definition was used in the sentence.

saw

1. to see something (verb)
2. a tool used to cut items (noun)

The girls **saw** a new store.

- Definition 1
- Definition 2

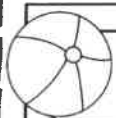


ABC Order

Put the 10 words in ABC Order.

food	cake
games	party
rides	carnival
hotdogs	popcorn
show	booth

1. _____
2. _____
3. _____
4. _____
5. _____
6. _____
7. _____
8. _____
9. _____
10. _____



Adjectives

Circle the adjectives in each sentence.

The big bears caught fish to eat.

The soft blanket kept me warm.



Pronouns

Circle the words that are pronouns.

police	her
him	it
blanket	an
ears	she
they	can



Compound Words

Circle the compound words below.

afternoon	hotdog
arrows	bagpipe
streets	written
cowboy	drivers
dragonfly	fireman

Sentence Construction

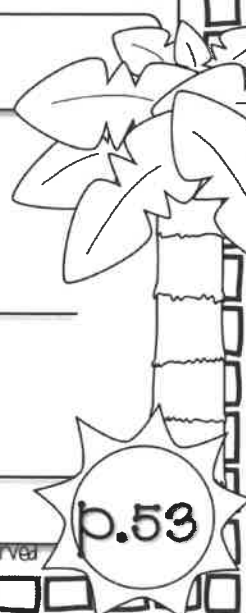
Correct the sentences below. Rewrite them correctly.

1. my cousins lives in texas



1. _____

2. can me pick up ben maggie and meg

2. _____



Week 9: Day 3



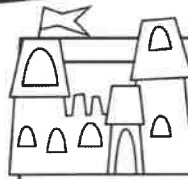
Addition

Find the sums for each problem below.

$$\begin{array}{r} 520 \\ +368 \\ \hline \end{array}$$

$$\begin{array}{r} 80 \\ +38 \\ \hline \end{array}$$

$$\begin{array}{r} 34 \\ +49 \\ \hline \end{array}$$



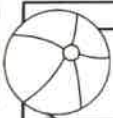
Subtraction

Find the difference for each problem below.

$$\begin{array}{r} 776 \\ -356 \\ \hline \end{array}$$

$$\begin{array}{r} 65 \\ -46 \\ \hline \end{array}$$

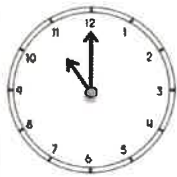
$$\begin{array}{r} 79 \\ -17 \\ \hline \end{array}$$



Time

Write the times shown on the clocks.







Counting

Fill in the missing numbers.

75, 80, ____, ____, 95, ____

____, ____, 800, 900, ____

120, ____, 140, ____, ____

____, 52, ____, ____, 55



Money

Count the coins. Write your answer in the box.





Word Problem

Answer the problem below. Show your work.

Bill caught 14 fish Monday, 18 fish Tuesday, and 23 fish Wednesday. How many fish did Bill catch in all?

add

subtract



Graphing

Use the graph below to answer the questions.

	1	2	3	4	5	6	7
red							
yellow							
blue							

- How many chose blue and red? ____
- How many more chose blue than red? ____
- What color had two votes? ____

Week 10: Day 1



Syllables

Put the 6 words in the correct box.

folders giveaway teammates

rectangle tomato corner

2 syllables

3 syllables

ABC Order

Put the 6 words in ABC Order.

length	time
foot	yard
meter	centimeter
scale	tablespoon
teaspoon	liter

- _____
- _____
- _____
- _____
- _____
- _____
- _____
- _____
- _____
- _____

Nouns & Verbs

Circle the correct verb for the noun.

Caleb _____ to his mom.

talk

talks

Jess _____ pictures.

draw

draws

Nouns

Circle people, places, and things.

feathers

guitar

playing

hard

teeth

watched

cannot

couch

speaker

red

Irregular Plurals

Circle the plural nouns.

men

mens

deers

deer

child

children

mice

mouses

teeth

tooths

Sentence Construction

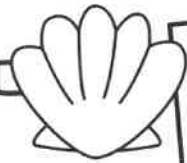
Correct the sentences below. Rewrite them correctly.

1. the kids whispers to each others


1. _____

2. it is hot in june july and august

2. _____



Week 10: Day 1



Addition

Find the sums for each problem below.

$$\begin{array}{r} 7231 \\ +3588 \\ \hline \end{array}$$

$$\begin{array}{r} 4930 \\ +3249 \\ \hline \end{array}$$

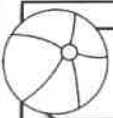


Subtraction

Find the difference for each problem below.

$$\begin{array}{r} 8077 \\ -2461 \\ \hline \end{array}$$

$$\begin{array}{r} 5002 \\ -401 \\ \hline \end{array}$$



Time

Write the times shown on the clocks.



Shapes

Read the questions. Circle the answers for each question.

1.



___ sides
___ corners

2.




___ sides
___ corners



Place Value

Write how many tens and ones you have for each problem and write the problem in expanded form..



___ tens ___ ones = ___
+ ___ = ___

Word Problem

Answer the problem below. Show your work.

Lesley has 28 markers. She gives some away. She has 10 markers left. How many did Lesley give away?

add

subtract

Fact Families

Using the numbers below, create a fact family.

48

32

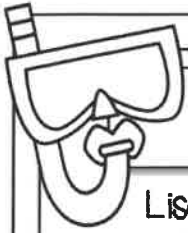
80

___ + ___ = ___

___ + ___ = ___

___ - ___ = ___

___ - ___ = ___



Reading Comprehension

Lisa loves to read books. She went to the library last week and got five new books to read. Lisa read four of them in one night. Today, Lisa is taking her books back to the library. When she gets there, she puts the books on the counter. Mrs. Black checks the books in and tells her about the new books. Lisa quietly walks over and looks at the new books. She picks one horse book, one princess book, and one book that looks funny. Lisa walks back to Mrs. Black to check out her books. She cannot wait to read them when she gets home.



Read the story above. Use the story to answer the questions.

- | | |
|---|---|
| <p>1. What three things does Lisa do when she gets to the library?</p> <p>_____</p> <p>_____</p> <p>_____</p> <p>_____</p> <p>_____</p> | <p>2. Why does Lisa look for books quietly?</p> <p>_____</p> <p>_____</p> <p>3. Which book would you read first? Why?</p> <p>_____</p> <p>_____</p> |
|---|---|

Sentence Construction

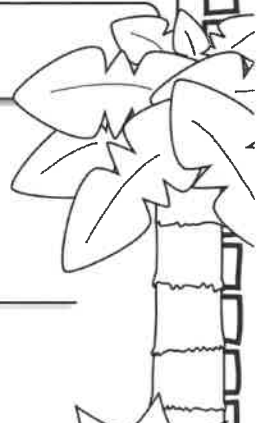
Correct the sentences below. Rewrite them correctly.

1. didnt you pick up bella pam and ben

1. _____


2. christmas is in december

2. _____





Week 10: Day 2



Addition

Find the sums for each problem below.

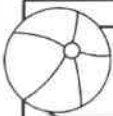
633	82	50
$+273$	$+46$	$+49$
<hr/>	<hr/>	<hr/>
<input type="text"/>	<input type="text"/>	<input type="text"/>



Subtraction

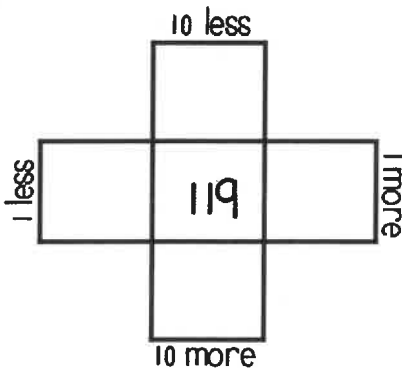
Find the difference for each problem below.

639	59	67
-149	-48	-23
<hr/>	<hr/>	<hr/>
<input type="text"/>	<input type="text"/>	<input type="text"/>



Multiples of 10

Write in the missing numbers.



True/False

Circle the problems below that are true.

- $9+3 = 12$
- $8+8 = 16$
- $5+7 = 11$
- $4+9 = 12$



Odd/Even

Circle the even numbers.

- | | |
|-------|-------|
| 48 | 81 |
| 163 | 98 |
| 95 | 117 |
| 70 | 26 |

Word Problem

Answer the problem below. Show your work.

Pam read 12 books in 4 months.
How many books did she read each month?

Fact Families

Using the numbers below, create a fact family.

<input type="text"/>	<input type="text"/>	<input type="text"/>
----------------------	----------------------	----------------------

$$24+61 = \underline{\quad}$$


$$61+ \underline{\quad} = 85$$

$$85 - \underline{\quad} = 24$$

$$\underline{\quad} - 24 = 61$$



Week 10: Day 3



Dictionary Skills


Read the definitions. Decide which definition was used in the sentence.

fly

1. type of insect (noun)
2. to move through the air (verb)

The plane can fly through the air.

- Definition 1
- Definition 2



ABC Order

Put the 10 words in ABC Order.

basin	oasis
iceberg	plain
trench	butte
range	seashore
islet	river

1. _____
2. _____
3. _____
4. _____
5. _____
6. _____
7. _____
8. _____
9. _____
10. _____



Adjectives

Circle the adjectives in each sentence.

The little boy has three hats.

The soft candy melted on the hot.



Pronouns

Circle the words that are pronouns.

- | | |
|------|------|
| she | the |
| him | them |
| car | take |
| it | dogs |
| they | her |



Compound Words

Circle the compound words below.

butter	earthworm
goldfish	grapevine
turkey	shelves
hairbrush	books
fencing	mailbox

Sentence Construction

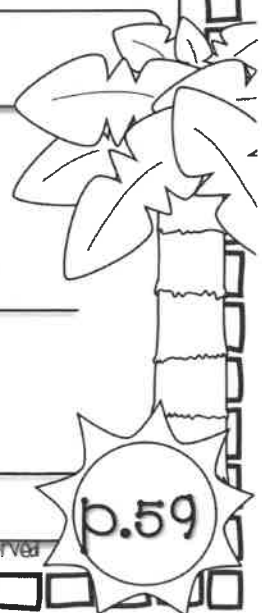
Correct the sentences below. Rewrite them correctly.

1. were eating tacos today

1. _____

2. sams alarm didnt go off this morning

2. _____





Week 10: Day 3




Addition

Find the sums for each problem below.

$$\begin{array}{r} 643 \\ +339 \\ \hline \end{array}$$

$$\begin{array}{r} 85 \\ +22 \\ \hline \end{array}$$

$$\begin{array}{r} 50 \\ +38 \\ \hline \end{array}$$



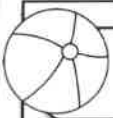
Subtraction

Find the difference for each problem below.

$$\begin{array}{r} 750 \\ -345 \\ \hline \end{array}$$

$$\begin{array}{r} 59 \\ -28 \\ \hline \end{array}$$

$$\begin{array}{r} 47 \\ -21 \\ \hline \end{array}$$



Time

Write the times shown on the clocks.



Counting

Fill in the missing numbers.

650, 660, _____, _____, _____

_____, _____, 830, 840, _____

200, _____, 400, _____, _____

_____, 88, _____, _____, 91



Money

Count the coins. Write your answer in the box.



Word Problem

Answer the problem below. Show your work.

The art teacher has 24 blue crayons, 32 red crayons, and 15 yellow crayons. How many crayons does she have in all?

add

subtract


_____ □ _____ □ _____ = _____

Graphing

Use the graph below to answer the questions.

	1	2	3	4	5	6	7
pizza							
hotdogs							
hamburgers							

- How many chose pizza and hamburgers? _____
- Which food had 6 votes? _____
- Which food had 3 votes? _____



Congratulations!!!
You completed
your packet!